

BLUE PRINT : SA-I (IX) : MATHEMATICS

Unit/Topic	1	2	3	4	Total
Number System	1(1)	2(1)	6(2)*	8(2)*	17(6)
Algebra Polynomials	3(3)	4(2)	6(2)	12(3)	25(10)
Geometry Euclids Geom, Lines and Angles, Triangles	2(2)	4(2)*	15(5)*	16(4)	37(13)
Coordinate Geometry	–	2(1)	–	4(1)	6(2)
Mensuration	2(2)	–	3(1)	–	5(3)
Total	8(8)	12(6)	30(10)	40(10)	90(34)

SAMPLE QUESTION PAPER, SA-I

CLASS : IX

Time : 3hrs.

MM : 90

SECTION - A

Question numbers 1 to 8 carry 1 mark each. For each question, four alternative choices have been provided of which only one is correct. You have to select the correct choice.

1. Which of the following is a rational number?

- (A) $\frac{-2}{3}$ (B) $\frac{-1}{\sqrt{5}}$ (C) $\frac{13}{\sqrt{5}}$ (D) $\frac{\sqrt{2}}{3}$

2. The value of k, for which the polynomial x^3-3x^2+3x+k has 3 as its zero, is

- (A) -3 (B) 9 (C) -9 (D) 12

3. Which of the following is a zero of the polynomial x^3+3x^2-3x-1 ?

- (A) -1 (B) -2 (C) 1 (D) 2

4. The factorisation of $-x^2+5x-6$ yields:

- (A) $(x-2)(x-3)$ (B) $(2+x)(3-x)$ (C) $-(x-2)(3-x)$ (D) $-(2-x)(3-x)$

5. In fig.1, $\angle DBC$ equals

- (A) 40° (B) 60° (C) 80° (D) 100°

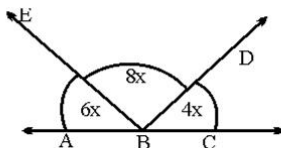


Fig.1

6. In fig.2, ABC is an equilateral triangle and BDC is an isosceles right triangle, right angled at D. $\angle ABD$ equals

- (A) 45° (B) 60° (C) 105° (D) 120°

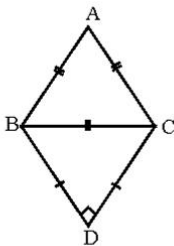


Fig.2

7. The sides of a triangle are 12cm, 16cm and 20cm. Its area is

- (A) 48cm^2 (B) 96cm^2 (C) 120cm^2 (D) 160cm^2

8. The side of an isosceles right triangle of hypotenuse $4\sqrt{2}\text{cm}$ is

- (A) 8cm (B) 6cm (C) 4cm (D) $4\sqrt{3}\text{cm}$

SECTION - B

Question numbers 9 to 14 carry 2 marks each :

9. If $x = 7 + \sqrt{40}$, find the value of $\sqrt{x} + \frac{1}{\sqrt{x}}$

10. Factorise the polynomial: $8x^3 - (2x-y)^3$

11. Find the value of 'a' for which $(x-1)$ is a factor of the polynomial $a^2x^3 - 4ax + 4a - 1$

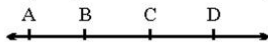


Fig. 3

12. In Fig. 3, if $AC = BD$, show that $AB = CD$. State the Euclid's postulate/axiom used for the same.

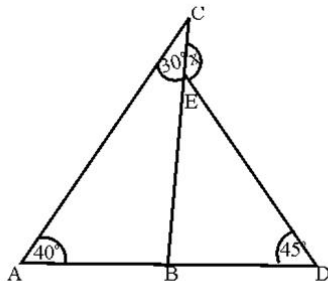


Fig. 4

13. In Fig. 4 find the value of x.

OR

In Fig. 5, ABCDE is a regular pentagon. Find the relation between 'a', 'b' and 'c'

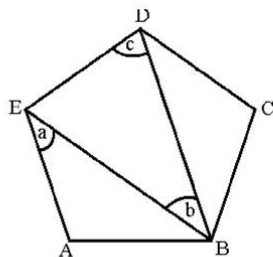


Fig. 5

14. In Fig. 6, ABC is an equilateral triangle. The coordinates of vertices B and C are (3,0) and (-3,0)

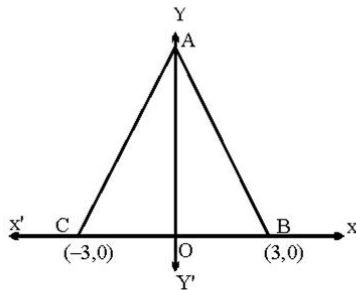


Fig. 6

respectively. Find the coordinates of its vertex A.

SECTION – C

Question numbers 15 to 24 carry 3 marks each:

15. Evaluate : $\left\{ \sqrt{5+2\sqrt{6}} \right\} + \left\{ \sqrt{8-2\sqrt{15}} \right\}$

OR

If $a=9 - 4\sqrt{5}$, Find the value of $a^2 + \frac{1}{a^2}$

16. Simplify the following:

$$\frac{7+3\sqrt{5}}{3+\sqrt{5}} - \frac{7-3\sqrt{5}}{3-\sqrt{5}}$$

OR

If $\frac{\sqrt{5}+\sqrt{3}}{\sqrt{5}-\sqrt{3}} = a + \sqrt{15} b$, find the values of a and b

17. Factorise the following:

$$12(x^2+7x)^2 - 8(x^2+7x)(2x-1) - 15(2x-1)^2$$

18. Show that 2 and $-\frac{1}{3}$ are the zeroes of the polynomial $3x^3 - 2x^2 - 7x - 2$.

Also, find the third zero of the polynomial

19. In Fig.7, $\ell \parallel m \parallel n$ and $a \perp \ell$. If $\angle BEF = 55^\circ$, Find the values of x, y and z

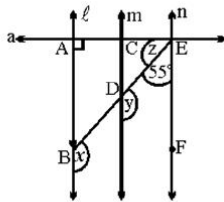


Fig.7

OR

In Fig.8, $\ell \parallel m \parallel n$. From the figure find the value of $(y+x)$: $(y-x)$

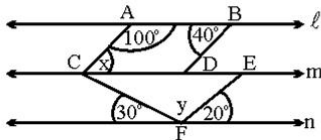


Fig.8

20. In Fig.9, $DE \parallel BC$ and $MF \parallel AB$.

Find (i) $\angle ADE + \angle MEN$ (ii) $\angle BDE$ (iii) $\angle BLE$

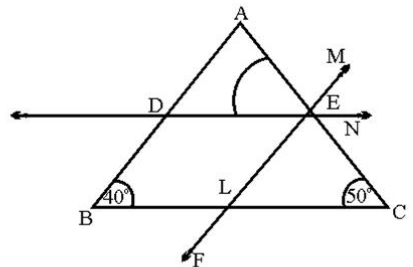


Fig.9

21. In Fig. 10, $\angle QPR = 90^\circ$ and $PT \perp RQ$. Show that $\angle TPS = \frac{1}{2}(\angle R - \angle Q)$

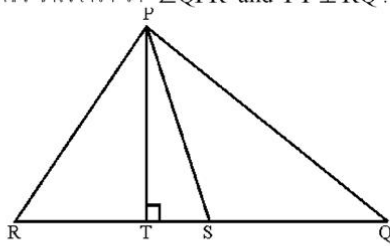


Fig.10

22. In Fig. 11, $\triangle ABC$ and $\triangle ABD$ are such that $AD=BC$, $\angle 1 = \angle 2$ and $\angle 3 = \angle 4$. Prove that $BD = AC$

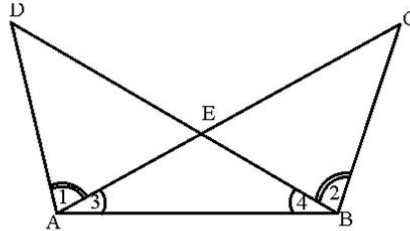


Fig.11

23. In Fig. 12, $AB \parallel CD$. If $\angle BAE = 50^\circ$ and $\angle AEC = 20^\circ$, find $\angle DCE$

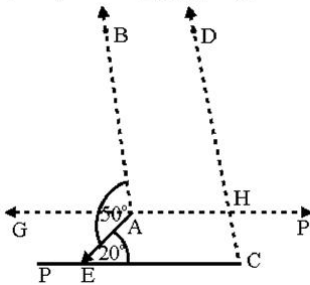


Fig.12

24. Find the area of a triangle whose perimeter is 180cm and two of its sides are 80cm and 18cm. Also calculate the altitude of the triangle corresponding to the shortest side.

SECTION-D

Question numbers 25 to 34 carry 4 marks each:

25. If $x = \frac{1}{2 - \sqrt{3}}$, find the value of $x^3 - 2x^2 - 7x + 5$

OR

Simplify : $\frac{1}{1 + \sqrt{2}} + \frac{1}{\sqrt{2} + \sqrt{3}} + \frac{1}{\sqrt{3} + \sqrt{4}} + \dots + \frac{1}{\sqrt{8} + \sqrt{9}}$

26. If $x = \frac{\sqrt{p+2q} + \sqrt{p-2q}}{\sqrt{p+2q} - \sqrt{p-2q}}$, then show that $qx^2 - px + q = 0$

OR

If $x = \frac{\sqrt{2}+1}{\sqrt{2}-1}$ and $y = \frac{\sqrt{2}-1}{\sqrt{2}+1}$, find the value of $x^2 + y^2 + xy$

27. If $x^3 + mx^2 - x + 6$ has $(x-2)$ as a factor, and leaves a remainder n when divided by $(x-3)$, find the values of m and n .

28. Prove that $(x+y)^3 + (y+z)^3 + (z+x)^3 - 3(x+y)(y+z)(z+x) = 2(x^3 + y^3 + z^3 - 3xyz)$

29. If A and B be the remainders when the polynomials $x^3 + 2x^2 - 5ax - 7$ and $x^3 + ax^2 - 12x + 6$ are divided by $(x+1)$ and $(x-2)$ respectively and $2A+B=6$, find the value of 'a'

30. From Fig. 13, find the coordinates of the points A, B, C, D, E and F . Which of the points are mirror images in
 (i) x -axis
 (ii) y -axis

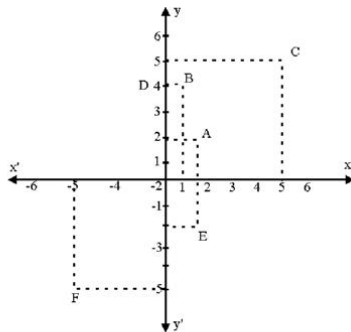


Fig.13

31. In Fig. 14, $QT \perp PR$, $\angle TQR = 40^\circ$ and $\angle SPR = 30^\circ$. Find the values of x, y and z

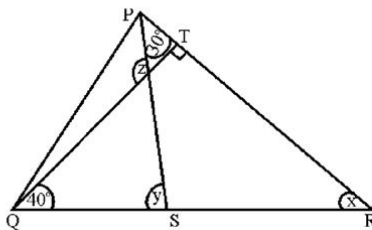


Fig.14

32. In Fig.15, ABCD is a square and EF is parallel to diagonal BD and $EM=FM$ Prove that

(i) $DF=BE$

(ii) AM bisects $\angle BAD$

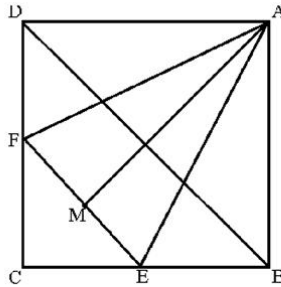


Fig.15

33. In Fig.16, $AB=BC$, $\angle A = \angle C$ and $\angle ABD = \angle CBE$. Prove that $CD=AE$

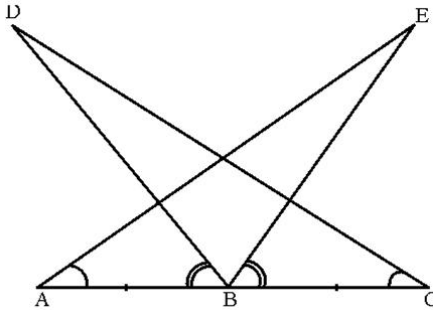


Fig.16

34. In Fig.17, $AB=AC$, D is a point in the interior of $\triangle ABC$ such that $\angle DBC = \angle DCB$. Prove that AD bisects $\angle BAC$ of $\triangle ABC$

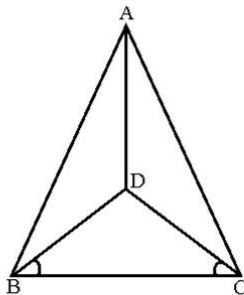


Fig.17

SAMPLE QUESTION PAPER, SA-I
MARKING SCHEME

CLASS : IX

Time : 3hrs.

MM : 90

SECTION - A

- | | | | |
|--------|--------|--------|--------|
| 1. (A) | 2. (C) | 3. (C) | 4. (D) |
| 5. (A) | 6. (C) | 7. (B) | 8. (C) |

1x8=8

SECTION - B

9. $x = 7 + \sqrt{40} = 7 + 2\sqrt{10} = (\sqrt{5})^2 + (\sqrt{2})^2 + 2(\sqrt{5})(\sqrt{2}) = (\sqrt{5} + \sqrt{2})^2$ ½

$$\Rightarrow \sqrt{x} = \sqrt{5} + \sqrt{2}, \quad \frac{1}{\sqrt{x}} = \frac{1}{\sqrt{5} + \sqrt{2}} = \frac{\sqrt{5} - \sqrt{2}}{3}$$
½

$$\therefore \sqrt{x} + \frac{1}{\sqrt{x}} = \frac{3(\sqrt{5} + \sqrt{2}) + (\sqrt{5} - \sqrt{2})}{3} = \frac{1}{3} [4\sqrt{5} + 2\sqrt{2}]$$
½

$$= \frac{2}{3} [2\sqrt{5} + \sqrt{2}]$$
½

10. $8x^3 - (2x-y)^3 = (2x)^3 - (2x-y)^3$ ½

$$= [2x - (2x-y)][(2x)^2 + (2x-y)^2 + 2x(2x-y)]$$
½

$$= y [4x^2 + 4x^2 + y^2 - 4xy + 4x^2 - 2xy]$$
½

$$= y [12x^2 + y^2 - 6xy]$$
½

11. $P(x) = a^2x^3 - 4ax + 4a - 1$

$$P(1) = 0 \Rightarrow a^2 - 4a + 4 - 1 = 0 \Rightarrow a = \underline{\pm 1}$$
1+1

12. $AC=BD \Rightarrow AC - BC = BD - BC$

$$\Rightarrow AB = CD$$
1+½

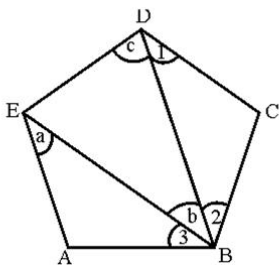
Euclid's Axiom : If equals are subtracted from equals, the remainders are equal ½

13. $\angle ABC = 180^\circ - (40^\circ + 30^\circ) = 110^\circ \Rightarrow \angle CBD = 70^\circ$ 1

$$x = \angle CBD + \angle BDE = 70^\circ + 45^\circ = 115^\circ$$
1

OR

ABCD is a regular pentagon



$$\begin{aligned} \Rightarrow \angle BCD &= 108^\circ && \frac{1}{2} \\ \Rightarrow \angle 1 = \angle 2 &= 36^\circ \quad [BC=CD] && \frac{1}{2} \\ \angle C + \angle 1 &= 108^\circ \Rightarrow \angle C = 72^\circ && \frac{1}{2} \\ \angle EAB &= 108^\circ \Rightarrow \angle a = 36^\circ && \frac{1}{2} \\ \angle b &= 108^\circ - (\angle 2 + \angle 3) = 108^\circ - 72^\circ = 36^\circ && \frac{1}{2} \\ \Rightarrow \angle a + \angle b &= 72^\circ = \angle C && \frac{1}{2} \end{aligned}$$

14. $AB = 6$ unit $\Rightarrow AC = BC = 6$ units

$OA = 3$ units and $\angle AOC = 90^\circ$ $\frac{1}{2}$

$\Rightarrow OC^2 = AC^2 - OA^2 = 36 - 9 = 27$

$\Rightarrow OC = 3\sqrt{3}$ units 1

\therefore Coordinates of C are $(0, 3\sqrt{3})$ $\frac{1}{2}$

SECTION - C

15. $\sqrt{5+2\sqrt{6}} = \sqrt{3+2+2\sqrt{6}}$ $\frac{1}{2}$

$= \sqrt{(\sqrt{3})^2 + (\sqrt{2})^2 + 2\sqrt{3}\sqrt{2}} = \sqrt{(\sqrt{3} + \sqrt{2})^2} = \sqrt{3} + \sqrt{2}$ $\frac{1}{2} + \frac{1}{2}$

$= \sqrt{3} + \sqrt{2}$

Also, $\sqrt{8-2\sqrt{15}} = \sqrt{(\sqrt{5})^2 + (\sqrt{3})^2 - 2\sqrt{5}\sqrt{3}} = \sqrt{(\sqrt{5} - \sqrt{3})^2} = \sqrt{5} - \sqrt{3}$ $\frac{1}{2} + \frac{1}{2}$

\therefore Required sum $= (\sqrt{3} + \sqrt{2}) + (\sqrt{5} - \sqrt{3}) = \sqrt{2} + \sqrt{5}$ $\frac{1}{2}$

OR

$a = 9 - 4\sqrt{5}$, $\frac{1}{a} = \frac{1}{9 - 4\sqrt{5}} = \frac{9 + 4\sqrt{5}}{9^2 - (4\sqrt{5})^2} = 9 + 4\sqrt{5}$ 1

$\therefore a + \frac{1}{a} = (9 - 4\sqrt{5}) + (9 + 4\sqrt{5}) = 18$ $\frac{1}{2}$

$a^2 + \frac{1}{a^2} = (a + \frac{1}{a})^2 - 2 = (18)^2 - 2$ 1

$= 324 - 2 = 322$ $\frac{1}{2}$

$$16. \frac{7+3\sqrt{5}}{3+\sqrt{5}} - \frac{7-3\sqrt{5}}{3-\sqrt{5}} = \frac{(7+3\sqrt{5})(3-\sqrt{5}) - (7-3\sqrt{5})(3+\sqrt{5})}{9-5} \quad 1$$

$$= \frac{1}{4} [21+2\sqrt{5}-15 - (21-2\sqrt{5}-15)] = \frac{1}{4} [6+2\sqrt{5}-6+2\sqrt{5}] = \sqrt{5} \quad 1+1$$

OR

$$\text{LHS} = \frac{\sqrt{5}+\sqrt{3}}{\sqrt{5}-\sqrt{3}} = \frac{(\sqrt{5}+\sqrt{3})^2}{5-3} = \frac{1}{2} [5+3+2\sqrt{15}] \quad 1$$

$$= 4 + \sqrt{15} = a + \sqrt{15} b \quad 1$$

$$\Rightarrow a = 4, b = 1 \quad 1$$

17. Let $x^2 + 7x = p$, $2x - 1 = q$

$$\therefore \text{Given expression} = 12p^2 - 8pq - 15q^2 \quad \frac{1}{2}$$

$$= 12p^2 - 18pq + 10pq - 15q^2$$

$$= 6p(2p - 3q) + 5q(2p - 3q)$$

$$= (6p + 5q)(2p - 3q) \quad 1+\frac{1}{2}$$

$$\therefore \text{Factors are : } [6(x^2 + 7x) + 5(2x-1)] [2(x^2 + 7x) - 3(2x-1)] \quad 1$$

$$= (6x^2 + 52x - 5)(2x^2 + 8x + 3)$$

18. $p(x) = 3x^3 - 2x^2 - 7x - 2$

$$p(2) = 3(2)^3 - 2(2)^2 - 14 - 2 = 24 - 8 - 16 = 0 \Rightarrow 2 \text{ is a zero of } p(x) \quad 1$$

$$p\left(\frac{-1}{3}\right) = 3\left(\frac{-1}{3}\right)^3 - 2\left(\frac{-1}{3}\right)^2 - 7\left(\frac{-1}{3}\right) - 2 = \frac{-1}{9} - \frac{2}{9} + \frac{7}{3} - 2 = 0 \Rightarrow \frac{-1}{3} \text{ is a zero of } p(x)$$

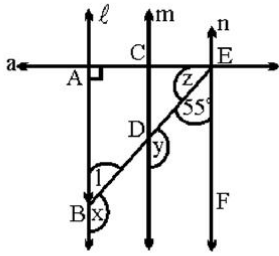
$$(x-2)\left(x+\frac{1}{3}\right) \text{ or } (x-2)(3x+1) \text{ is a factor of } p(x) \quad 1$$

$$\text{or } 3x^2 - 5x - 2 \text{ is a factor of } p(x)$$

$$(3x^3 - 2x^2 - 7x - 2) \div (3x^2 - 5x - 2) = x + 1 \quad \frac{1}{2}$$

$$\therefore x = -1 \text{ is the third zero of } p(x) \quad \frac{1}{2}$$

19.



$l \parallel n \Rightarrow \angle CEF = 90^\circ$

$\Rightarrow Z = (90^\circ - 55^\circ) = 35^\circ$

$\Rightarrow \angle x = 90^\circ + z = 90^\circ + 35^\circ = 125^\circ$

$\angle y = \angle x = 125^\circ$

OR

$y = 180^\circ - (30^\circ + 20^\circ) = 130^\circ$

$l \parallel m \Rightarrow x + 100^\circ = 180^\circ$

$\Rightarrow x = 80^\circ$

$\therefore x + y = 130^\circ + 80^\circ = 210^\circ$

$y - x = 130^\circ - 80^\circ = 50^\circ$

$\Rightarrow (y + x) : (y - x) = 21 : 5$

1
1
1

1/2
1
1
1/2

20. $DE \parallel BC$ and AB is a transversal

$\Rightarrow \angle ADE = 40^\circ$

$DE \parallel BC$ and $LE \parallel AB \Rightarrow DBLE$ is a \parallel gm

$\therefore \angle DEL = \angle MEN = 40^\circ$

\therefore (i) $\angle ADE + \angle MEN = 2 \times 40^\circ = 80^\circ$

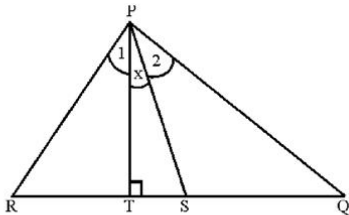
(ii) $\angle BDE = 180^\circ - 40^\circ = 140^\circ$

(iii) $\angle BLE = \angle BDE = 140^\circ$

For fig.

1/2
1/2
1
1/2+1/2
1/2

21.



$\angle 1 + \angle x = \angle 2$ (Given).....

$\angle 1 + \angle R = \angle 2 + x + \angle Q$

$\angle 1 + \angle R = \angle 1 + 2x + \angle Q$

$\Rightarrow 2x = \angle R - \angle Q \Rightarrow \angle TPS = \frac{1}{2} (\angle R - \angle Q)$

1/2

1
1

22. It is given that $\angle 1 = \angle 2$ and $\angle 3 = \angle 4$

$\angle 1 + \angle 3 = \angle 2 + \angle 4 \Rightarrow \angle DAB = \angle CBA$

In Δ 's DAB and CBA

$AD = BC, AB = AB, \angle DAB = \angle CBA$

$\therefore \Delta DAB \cong \Delta CBA \Rightarrow BD = AC$

1/2
1/2
1

23. Draw GAP || PC ½
- $\angle GAE = \angle AEC = 20^\circ$ (i) ½
- AB || DH and GP is a transversal ½
- $\therefore \angle GAB = \angle GHD$ (ii) 1
- Again, GP || CE $\Rightarrow \angle GHD = \angle ECD$ (iii) ½
- from (i), (ii) and (iii), we get
- $\angle DCE = 30^\circ$ ½
24. Two sides are 80cm, 12cm and perimeter = 180cm ½
- \therefore Third side = $180 - (98) = 82\text{cm}$
- The sides are 82cm, 80cm, 18cm
- Now $(80)^2 = 6400$, $18^2 = 324$ 1
- $\Rightarrow (80)^2 + (18)^2 = 6724$
- $(82)^2 = 6724$
- $\therefore \Delta$ is right angled. ½
- \therefore area = $\frac{1}{2} \times 80 \times 18 = 720\text{cm}^2$ ½
- altitude corresponding to shortest side = 80cm ½

SECTION - D

25. $x = \frac{1}{2 - \sqrt{3}} = \frac{2 + \sqrt{3}}{(2)^2 - (\sqrt{3})^2} = 2 + \sqrt{3}$ 1
- $\Rightarrow (x-2)^2 = 3 \Rightarrow x^2 - 4x + 1 = 0$ ½
- $(x^3 - 2x^2 - 7x + 5) \div (x^2 - 4x + 1) \Rightarrow$ Quotient = $x+2$, Remainder = 3 1+½
- $\therefore x^3 - 2x^2 - 7x + 5 = (x+2)(x^2 - 4x + 1) + 3 = 3$ 1

OR

$$\frac{1}{\sqrt{2}+1} = \frac{\sqrt{2}-1}{(\sqrt{2}+1)(\sqrt{2}-1)} = \sqrt{2}-1, \frac{1}{\sqrt{3}+\sqrt{2}} = \sqrt{3}-\sqrt{2}, \frac{1}{\sqrt{4}+\sqrt{3}} = \sqrt{4}-\sqrt{3}$$

$$\frac{1}{\sqrt{8}+\sqrt{9}} = \sqrt{9}-\sqrt{8}$$

3

$$\therefore \text{ Given expression} = (\sqrt{2} - 1) + (\sqrt{3} - \sqrt{2}) + (\sqrt{4} - \sqrt{3}) + \dots + (\sqrt{8} - \sqrt{7}) + (\sqrt{9} - \sqrt{8}) \quad 1$$

$$\sqrt{9} - 1 = 3 - 1 = 2$$

$$26. \quad x = \frac{[\sqrt{p+2q} + \sqrt{p-2q}]^2}{\cancel{p+2q} - \cancel{p+2q}} = \frac{1}{4q} [p + \cancel{2q} + p - \cancel{2q} + 2\sqrt{p^2 - 4q^2}] \quad 1+1/2$$

$$= \frac{1}{2q} [p + \sqrt{p^2 - 4q^2}] \Rightarrow 2qx - p = \sqrt{p^2 - 4q^2} \quad 1/2+1/2$$

$$\Rightarrow \cancel{4}q^2x^2 + \cancel{p}^2 - \cancel{4}pqx = \cancel{p}^2 - \cancel{4}q^2 \quad 1$$

$$qx^2 - px + q = 0 \quad 1/2$$

OR

$$x = (\sqrt{2} + 1)^2 = 3 + 2\sqrt{2}, \quad y = 3 - 2\sqrt{2} \quad 1 1/2$$

$$x+y = 6, \quad xy = 9 - 8 = 1 \quad 1$$

$$x^2 + y^2 + xy = (x+y)^2 - xy = 36 - 1 = 35 \quad 1+1/2$$

$$27. \quad p(x) = x^3 + mx^2 - x + 6, \quad p(2) = 0 \Rightarrow 8 + 4m - 2 + 6 = 0$$

$$\Rightarrow 4m = -12 \Rightarrow m = -3 \quad 1+1/2$$

$$p(3) = n, \quad \therefore n = (3)^3 + (-3)(3)^2 - 3 + 6 \quad 1+1/2$$

$$n = 3 \quad 1$$

$$28. \quad \text{We know that } a^3 + b^3 + c^3 - 3abc = (a+b+c)(a^2 + b^2 + c^2 - ab - bc - ca) \quad 1/2$$

$$\text{Let } a = x+y, \quad b = y+z, \quad c = z+x$$

$$\text{LHS} = 2(x+y+z)[(x+y)^2 + (y+z)^2 + (z+x)^2 - (x+y)(y+z) - (y+z)(z+x) - (z+x)(x+y)] \quad 1$$

$$= 2(x+y+z)[x^2 + y^2 + 2xy + x^2 + y^2 + z^2 + 2yz + z^2 - xy - y^2 - xz - yz - z^2 + 2zx - yz - xy - xz - 2x - x^2 - yz - xy] \quad 1 1/2$$

$$= 2(x+y+z)[x^2 + y^2 + z^2 - xy - yz - zx] \quad 1$$

$$= 2(x^3 + y^3 + z^3 - 3xyz)$$

$$29. \quad p(x) = x^3 + 2x^2 - 5ax - 7, \quad q(x) = x^3 + ax^2 - 12x + 6$$

It is given that $p(-1) = A$ and $q(2) = B$ 1

$$\therefore A = -1 + 2 + 5a - 7 \Rightarrow A = 5a - 6 \quad 1$$

$$B = 8 + 4a - 24 + 6 \Rightarrow B = 4a - 10 \quad 1$$

$$\text{Also } 2A + B = 6 \Rightarrow 10a - 12 + 4a - 10 = 6 \quad 1$$

$$\Rightarrow 14a = 28 \Rightarrow a = 2$$

$$30. \quad \text{Coordinates of: } A(2,2), B(1,4), C(5,5), \quad 2$$

$$D(-1,4), E(2,-2), F(-5,-5)$$

$$E \text{ is the mirror image of } A \text{ in } x\text{-axis} \quad 1$$

D is the mirror image of B in y-axis

1

31. In ΔRPS , $\angle P + \angle S + x = 180^\circ$

$$\Rightarrow x = 180^\circ - 100^\circ - 30^\circ = 50^\circ$$

1

$$y = 180^\circ - \angle PSR = 180^\circ - 100^\circ = 80^\circ$$

1½

$$z = y + 40^\circ = 120^\circ$$

1½

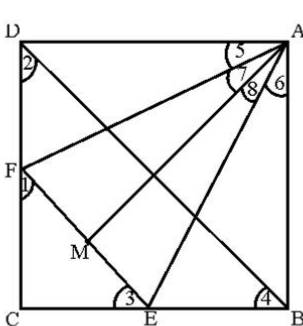
32.

$EF \parallel BD \Rightarrow \angle 1 = \angle 2$ and $\angle 3 = \angle 4$

$$\angle 2 = \angle 4 \Rightarrow \angle 1 = \angle 3$$

1

$\therefore DF = BE$ [$\because BC - CE = CD - CF$]



33.

$\Delta ADF \cong \Delta ABE$ [$AD = AB$, $FD = BE$, $\angle D = \angle B = 90^\circ$]

$$\Rightarrow AF = AE \text{ and } \angle 5 = \angle 6$$

1

$\Delta AMF \cong \Delta AME$ [$AF = AE$, $FM = EM$, $AM = AM$]

½

$$\therefore \angle 7 = \angle 8 \Rightarrow \angle 7 + \angle 5 = \angle 8 + \angle 6 \Rightarrow \angle MAD = \angle MAB$$

1

$\Rightarrow AM$ bisects $\angle BAD$

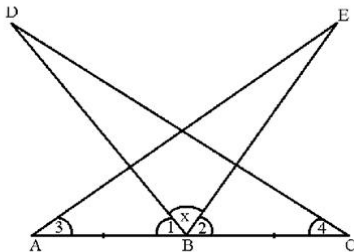
½

$$\angle 1 = \angle 2 \text{ (Given)}$$

$$\therefore \angle 1 + \angle x = \angle 2 + \angle x$$

1+½

$$\Rightarrow \angle ADE = \angle CBD$$



34.

½

It

In Δ 's ABE and CBD

(i) $\angle 3 = \angle 4$ (Given) (ii) $\angle ADE = \angle CBD$

(iii) $AB = BC$

2+½

$\Rightarrow \Delta$'s are $\cong \Rightarrow CD = AE$

$AB = AC \Rightarrow \angle ABC = \angle ACB \dots$ (i)

is given that $\angle DBC = \angle DCB \dots$ (ii) $\Rightarrow DB = DC$
from [(i)-(ii)], we get

$$\angle ABD = \angle ACD$$

½

Δ 's ABD and ACD are \cong by (sss)

1

$$\therefore \angle BAD = \angle CAD$$

$\Rightarrow AD$ bisects $\angle BAC$

1

