

Class IX : Math
Chapter 11: Geometric Constructions

Top Concepts

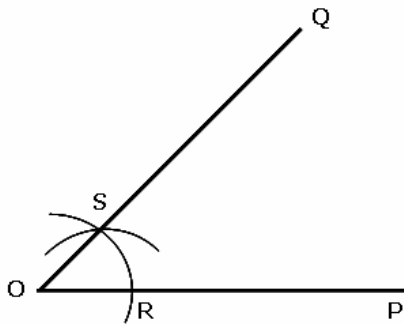
- 1.** To construct an angle equal to a given angle.

Given : Any $\angle POQ$ and a point A.

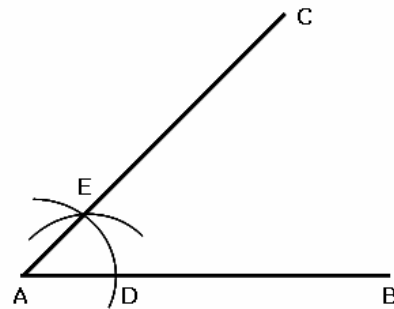
Required : To construct an angle at A equal to $\angle POQ$.

Steps of Construction:

1. With O as centre and any (suitable) radius, draw an arc to meet OP at R and OQ at S.
2. Through A draw a line AB.
3. Taking A as centre and same radius (as in step 1), draw an arc to meet AB at D.
4. Measure the segment RS with compasses.
5. With d as centre and radius equal to RS, draw an arc to meet the previous arc at E.
6. Join AE and produce it to C, then $\angle BAC$ is the required angle equal to $\angle POQ$



(i)



(ii)

- 2.** To bisect a given angle.

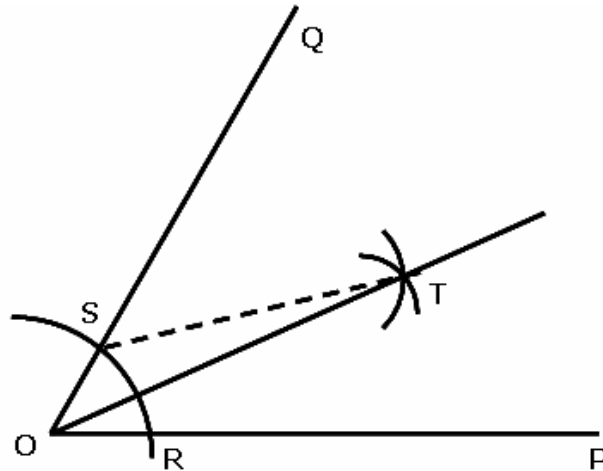
Given : Any $\angle POQ$

Required : To bisect $\angle POQ$.

Steps of Construction:

1. With O as centre and any (suitable) radius, draw an arc to meet OP at R and OQ at S.

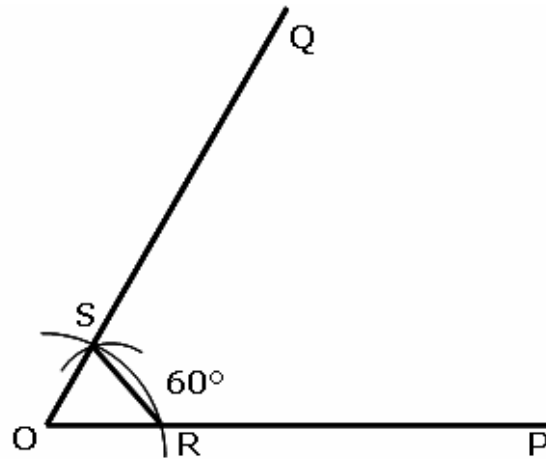
2. With R as centre and any suitable radius (not necessarily) equal to radius of step 1 (but $> \frac{1}{2} RS$), draw an arc. Also, with S as centre and same radius draw another arc to meet the previous arc at T.
3. Join OT and produce it, then OT is the required bisector of $\angle POQ$.



3. To construct angles of 60° , 30° , 120° , 90° , 45°
 - (i) To construct an angle of 60°

Steps of Construction:

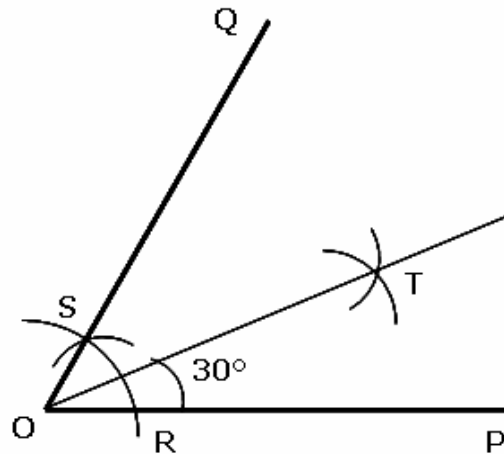
 1. Draw any line OP.
 2. With O as centre and any suitable radius, draw an arc to meet OP at R.
 3. With R as centre and same radius (as in step 2), draw an arc to meet the previous arc at S.
 4. Join OS and produce it to Q, then $\angle POQ = 60^\circ$.



(ii) To construct an angle of 30°

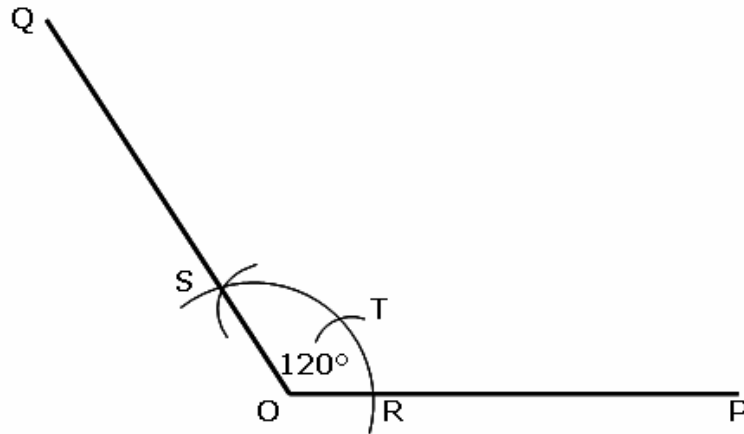
Steps of Construction

1. Construct $\angle POQ = 60^\circ$ (as above).
2. Bisect $\angle POQ$ (as in construction 2). Let OT be the bisector of $\angle POQ$, then $\angle POT = 30^\circ$



(iii) To construct an angle of 120°

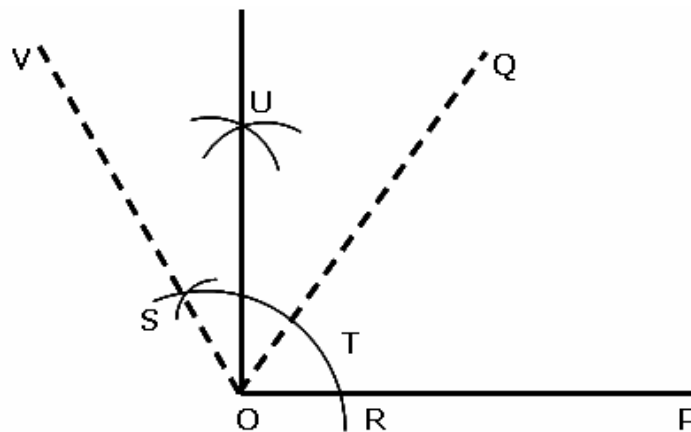
1. Draw any line OP.
2. With O as centre and any suitable radius, draw an arc to meet OP at R.
3. With R as centre and same radius (as in step 2), draw an arc to meet the previous arc at T. With T as centre and same radius, draw another arc to cut the first arc at S.
4. Join OS and produce it to Q, then $\angle POQ = 120^\circ$.



(iv) To construct an angle of 90°

Steps of Construction

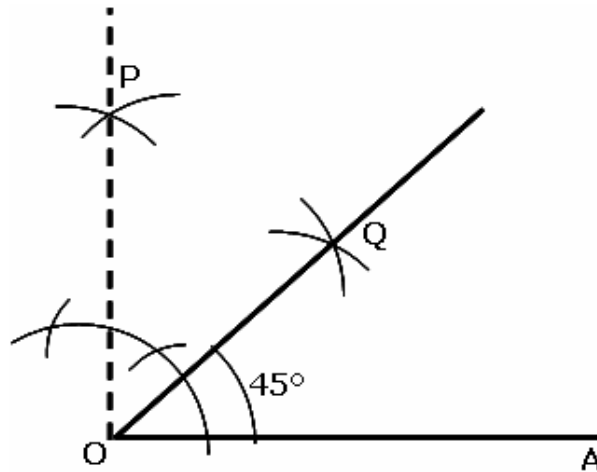
1. Construct $\angle POQ = 60^\circ$
(as in construction 3(i)).
2. Construct $\angle POV = 120^\circ$ (as above).
3. Bisect $\angle QOV$ (as in construction 2). Let OU be the bisector of $\angle QOV$, then $\angle POU = 90^\circ$.



(v) To construct an angle of 45°

Steps of Construction

1. Construct $\angle AOP = 90^\circ$ (as above).
 2. Bisect AOP (as in construction 2).
- Let OQ be the bisector of $\angle AOP$, then $\angle AOQ = 45^\circ$



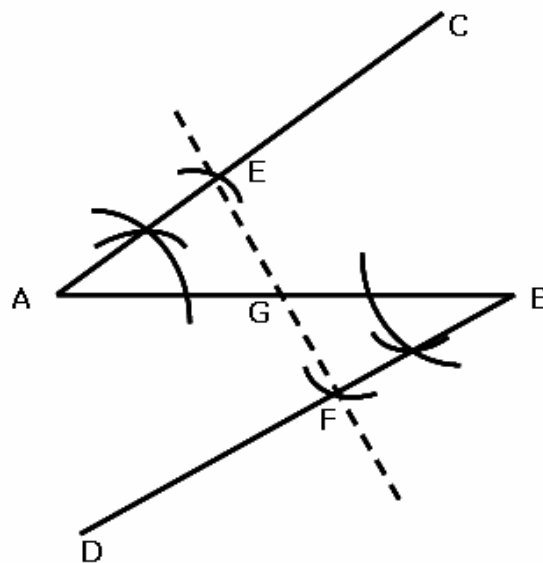
4. To bisect a given line segment.

Given : Any line segment AB.

Required : To bisect line segment AB.

Steps of Construction:

1. At A, construct any suitable angle BAC.
2. At B, construct $\angle ABD = \angle BAC$ on the other side of the line AB.
3. With A as centre and any suitable radius, draw an arc to meet AC at E.
4. From BD, cut off $BF = AE$.
5. Join EF to meet AB at G, then EG is a bisector of the line segment AB and G is mid – point of AB.



(ii) To divided a given line segment in a number of equal part.

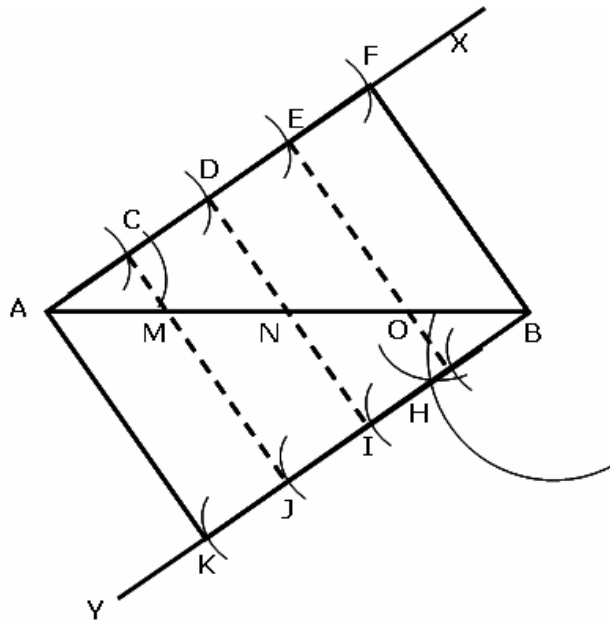
- 5.** Divided a line segment AB of length 8 cm into 4 equal part.

Given : A line segment AB of length 8 cm.

Required : To divide line segment 8 cm into 4 equal parts.

Steps of Construction:

1. Draw line segment $AB = 8$ cm.
2. At A, construct any suitable angle BAX .
3. At B, construct $\angle ABY = \angle BAX$ on the other side of the line AB.
4. From AX, cut off 4 equal distances at the points C, D, E and F such that $AC = CD = DE = EF$.
5. With the same radius, cut off 4 equal distances along BY at the points H, I, J and K such that $BH = HI = IJ = JK$.
6. Join AK, CJ, DI, EH and FB. Let CJ, DI and EH meet the line segment AB at the points M, N and O respectively. Then, M, N and O are the points of division of AB such that $AM = MN = NO = OB$.



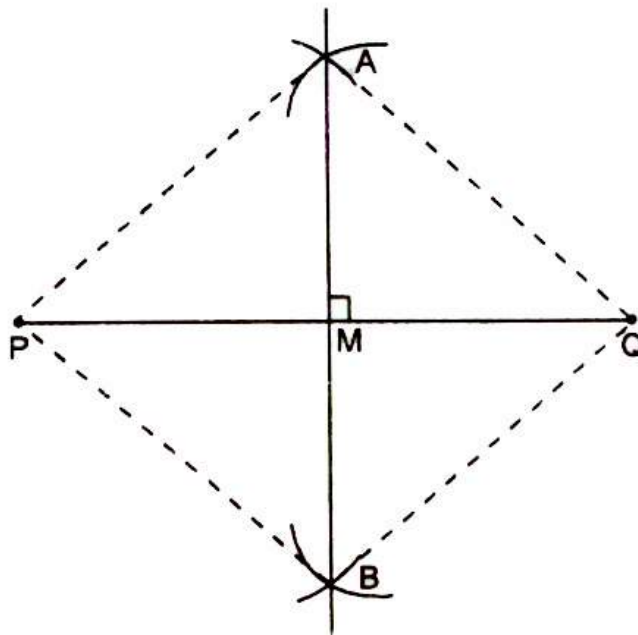
- 6.** To draw a perpendicular bisector of a line segment.

Given : Any line segment PQ.

Required : To draw a perpendicular bisector of line segment PQ.

Steps of Construction:

1. With P as centre and any line suitable radius draw arcs, one on each side of PQ.
2. With Q as centre and same radius (as in step 1), draw two more arcs, one on each side of PQ cutting the previous arcs at A and B.
3. Join AB to meet PQ at M, then AB bisects PQ at M, and is perpendicular to PQ, Thus, AB is the required perpendicular bisector of PQ.



- 7.** To construct an equilateral triangle when one of its side is given.

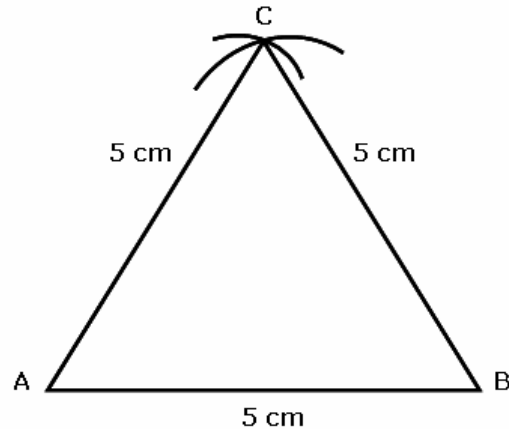
E.g.: Construct an equilateral triangle whose each side is 5 cm.

Given : Each side of an equilateral triangle is 5 cm.

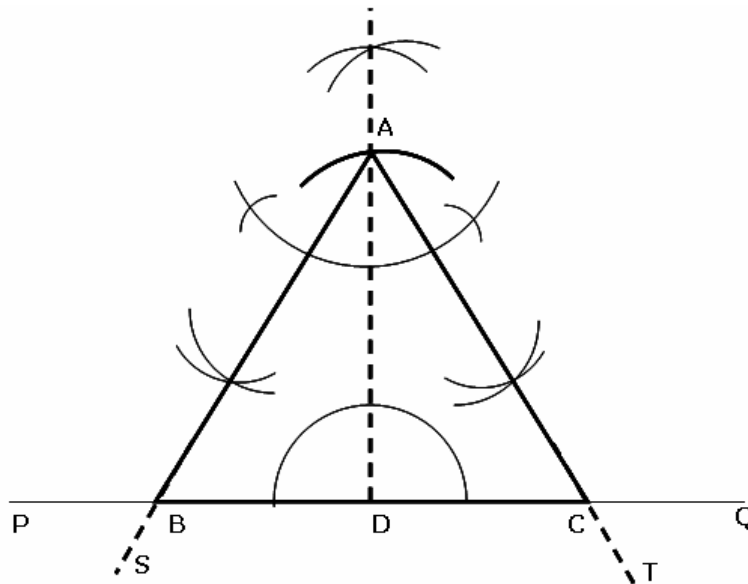
Required : To construct the equilateral triangle.

Steps of Construction:

1. Draw any line segment $AB = 5$ cm.
2. With A as centre and radius 5 cm draw an arc.
3. With B as centre and radius 5 cm draw an arc to cut the previous arc at C.
4. Join AC and BC. Then ABC is the required triangle.



- 8.** To construct an equilateral triangle when its altitude is given.
E.g.: Construct an equilateral triangle whose altitude is 4 cm.
Steps of Construction:
1. Draw any line segment PQ.
 2. Take an point D on PQ and At D, construct perpendicular DR to PQ. From DR, cut off DA = 4 cm.
 3. At A, construct $\angle DAS = \angle DAT = \frac{1}{2} \times 60^\circ = 30^\circ$ on either side of AD. Let AS and AT meet PQ at points B and C respectively. Then, ABC is the required equilateral triangle.



- 9.** Construction of a triangle, given its Base, Sum of the other Two sides and one Base Angle.

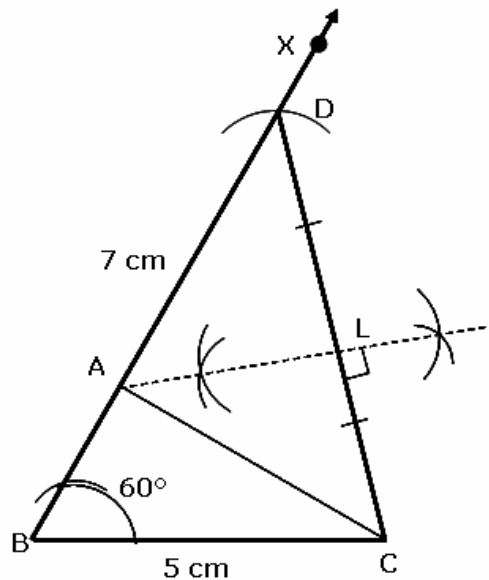
E.g Construct a triangle with base of length 5 cm, the sum of the other two sides 7 cm and one base angle of 60° .

Given: In $\triangle ABC$, base $BC = 5$ cm, $AB + AC = 7$ cm and $\angle ABC = 60^\circ$

Required : To construct the $\triangle ABC$.

Steps of Construction:

1. Draw $BC = 5$ cm.
2. At B, construct $\angle CBX = 60^\circ$
3. From BX, cut off $BD = 7$ cm.
4. Join CD.
5. Draw the perpendicular bisector of CD, intersecting BD at a point A.
6. Join AC. Then, ABC is the required triangle.



- 10.** Construction of a triangle, Given its Base, Difference of the Other Two Sides and one Base Angle.

Eg: Construct a triangle with base of length 7.5 cm, the difference of the other two sides 2.5 cm, and one base angle of 45°

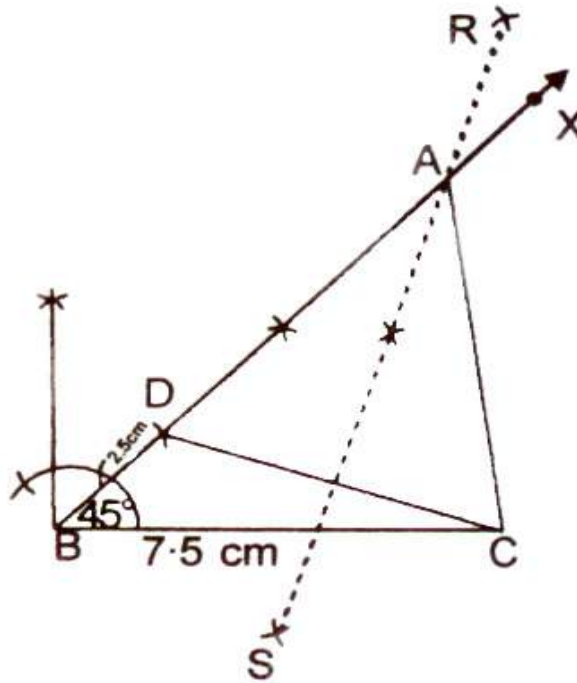
Given : In $\triangle ABC$, base $BC = 7.5$ cm, the difference of the other two sides, $AB - AC$ or $AC - AB = 2.5$ cm and one base angle is 45° .

Required : To construct the $\triangle ABC$,

CASE (i) $AB - AC = 2.5$ cm.

Steps of Construction:

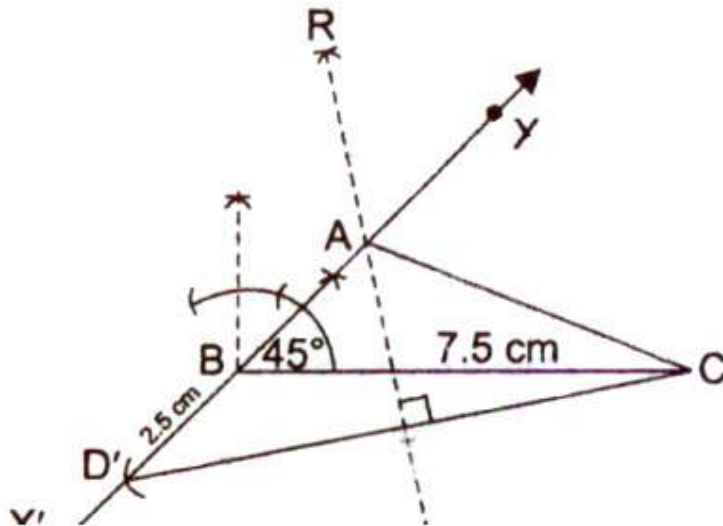
1. Draw $BC = 7.5$ cm.
2. At B, construct $\angle CBX = 45^\circ$.
3. From BX, cut off $BD = 2.5$ cm.
4. Join CD.
5. Draw the perpendicular bisector RS of CD intersecting BX at a point A.
6. Join AC. Then, ABC is the required triangle.



CASE (ii) $AC - AB = 2.5$ cm

Steps of Construction:

1. Draw $BC = 7.5$ cm.
2. At B, construct $\angle CBX = 45^\circ$ and produce XB to form a line XBX' .
3. From BX' , cut off $BD' = 2.5$ cm.
4. Join CD' .
5. Draw perpendicular bisector RS of CD' intersecting BX at a point A.
6. Join AC. Then, ABC is the required triangle.



e

11. Construction of a Triangle of Given Perimeter and Base Angles.

Construct a triangle with perimeter 11.8 cm and base angles 60° and 45° .

Given : In ΔABC , $AB+BC+CA = 11.8$ cm, $\angle B = 60^\circ$ & $\angle C = 45^\circ$.

Required : To construct the ΔABC .

Steps of Construction:

1. Draw $DE = 11.8$ cm.
2. At D, construct $\angle EDP = \frac{1}{2}$ of $60^\circ = 30^\circ$ and at E, construct $\angle DEQ = \frac{1}{2}$ of $45^\circ = 22\frac{1}{2}^\circ$.
3. Let DP and EQ meet at A.
4. Draw perpendicular bisector of AD to meet DE at B.
5. Draw perpendicular bisector of AE to meet DE at C.
6. Join AB and AC. Then, ABC is the required triangle.

