

Chapter 8

Similar Triangles

Similar Triangles:

Whenever we talk about two congruent figures then they have the 'same shape' and the 'same size'. There are figures that are of the 'same shape but not necessarily of the 'same size'. They are said to be similar. Congruent figures are similar but the converse is not true

All regular polygons of same number of sides are similar. They are equilateral triangles, squares etc. All circles are also similar.

Two polygons of the same number of sides are similar if their corresponding angles are equal and corresponding sides are proportional.

Two triangles are similar if their corresponding angles are equal and corresponding sides are proportional.

Basic Proportionality Theorem or Thales Theorem.

Theorem-1

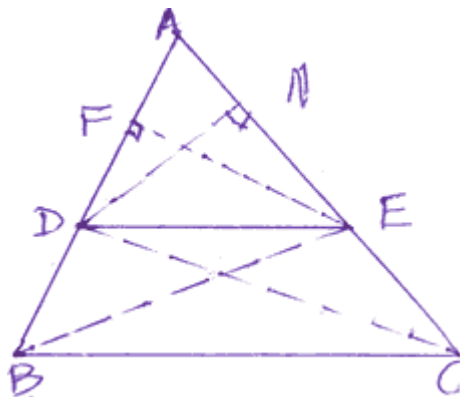
If a line is drawn parallel to one side of a triangle, to intersect the other two sides in distinct points, the other two sides are divided in the same ratio.

Given: - In $\triangle ABC$, $DE \parallel BC$

To prove:-
$$\frac{AD}{DB} = \frac{AE}{EC}$$

Construction:- BE and CD are joined. $EF \perp AB$ and $DN \perp AC$ are drawn.

Proof:-



$$\begin{aligned} \text{ar}(\triangle ADE) &= \frac{1}{2} \times AD \times EF \\ &= \frac{1}{2} \times AE \times DN \end{aligned}$$

$$\text{ar}(\triangle BDE) = \frac{1}{2} \times BD \times F$$

$$\text{ar}(\triangle CDE) = \frac{1}{2} \times EC \times DN$$

$$\frac{\text{ar}(\triangle ADE)}{\text{ar}(\triangle BDE)} = \frac{\frac{1}{2} \times AD \times EF}{\frac{1}{2} \times BD \times EF} = \frac{AD}{BD} \text{-----(1)}$$

$$\frac{\text{ar}(\triangle ADE)}{\text{ar}(\triangle CDE)} = \frac{\frac{1}{2} \times AE \times DN}{\frac{1}{2} \times EC \times DN} = \frac{AE}{EC} \text{-----(2)}$$

But $\text{ar}(\triangle BDE) = \text{ar}(\triangle CDE) \text{-----(3)}$

as they are on the same base DE and $DE \parallel BC$

∴ from (1), (2) and (3) we get $\frac{AD}{DB} = \frac{AE}{EC}$

Corollary: In $\triangle ABC$, $DE \parallel BC$ then

$$\frac{AD}{AB} = \frac{AE}{AC}$$

Proof:- We know

$$\frac{AD}{DB} = \frac{AE}{EC} \text{----- (1)}$$

$$\therefore \frac{AD}{DB} + 1 = \frac{AE}{EC} + 1$$

$$\frac{AD + DB}{DB} = \frac{AE + EC}{EC}$$

$$\frac{AB}{DB} = \frac{AC}{EC}$$

$$\frac{DB}{AB} = \frac{EC}{AE} \text{ ----- (2)}$$

(Taking reciprocals)

Multiplying (1) and (2) we get

$$\frac{AD}{DB} \times \frac{DB}{AB} = \frac{AE}{EC} \times \frac{EC}{AC}$$

$$\frac{AD}{AB} = \frac{AE}{AC}$$

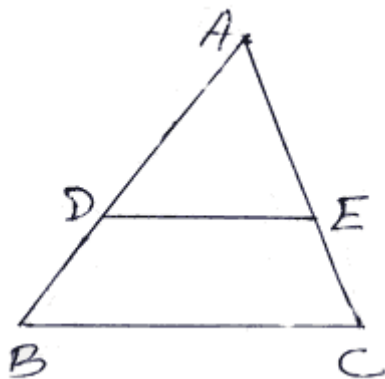
Property - 1. If a line divides any two sides of a triangle in the same ratio, the line is parallel to the third side.

Example 1. In $(\triangle ABC, DE \parallel BC$ and $AD = 2.4cm, AE = 3.2cm, EC = 4.8cm$. Find AB.

Solution:-

$$DE \parallel BC \text{ (given)}$$

$$\frac{AD}{DB} = \frac{AE}{EC} \text{ (Thales Theorem)}$$



$$\frac{2.4}{BD} = \frac{3.2}{4.8}$$

$$\therefore BD = \frac{2.4 \times 4.8}{3.2}$$

$$= 3.6cm$$

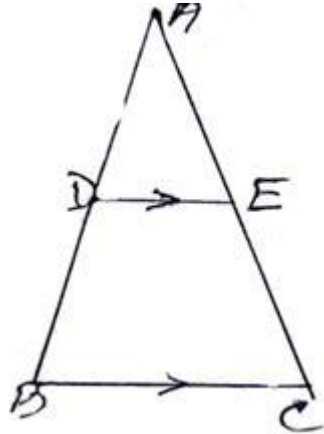
$$= 3.6cm$$

$$AB = AD + DB$$

$$= 2.4 + 3.6$$

$$= 6.0\text{cm}$$

Example 2. In the given figure, $DE \parallel BC$ and $AD = 4x - 3$, $AE = 8x - 7$, $BD = 3x - 1$, $CE = 5x - 3$, Find x .



Solution:-

In $\triangle ABC$, $DE \parallel BC$ (given)

$$\frac{AD}{DB} = \frac{AE}{EC}$$

$$\frac{4x - 3}{3x - 1} = \frac{8x - 7}{5x - 3}$$

$$\text{Or, } (4x - 3)(5x - 3) = (8x - 7)(3x - 1)$$

$$\text{Or, } 20x^2 - 12x - 15x + 9 = 24x^2 - 8x - 21x + 7$$

$$\text{Or, } 4x^2 - 2x - 2 = 0$$

$$\text{Or, } 2x^2 - x - 1 = 0$$

$$\text{Or, } 2x^2 - 2x + x - 1 = 0$$

$$\text{Or, } 2x(x - 1) + 1(x - 1) = 0$$

$$(x - 1)(2x + 1) = 0$$

$$x = 1, -1/2$$

But sides of a triangle cannot be negative

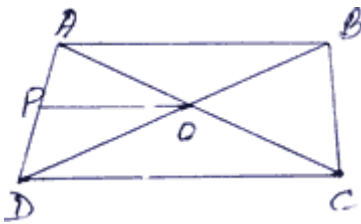
$$\therefore x = 1$$

Example 3. ABCD is a trapezium such that $AB \parallel CD$. Its diagonals AC and BD intersect each other at o.

prove that $\frac{AO}{OC} = \frac{BO}{OD}$.

Solution:- Given $AB \parallel DC$ AC and BD intersect at o

To Prove: $\frac{AO}{OC} = \frac{BO}{OD}$



Construction: $OP \parallel AB \parallel CD$ is drawn

Proof:- In $\triangle ADC, OP \parallel CD$

$$\therefore \frac{PA}{PD} = \frac{AO}{OC}$$

In $\triangle DAB, OP \parallel AB$

$$\therefore \frac{PA}{PD} = \frac{BO}{OD} \text{ (Corollary of Thales theo.)}$$

From (i) and (ii) we get

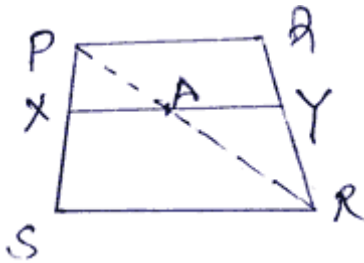
$$\frac{AO}{OC} = \frac{BO}{OD}$$

Example 4. Prove that any line parallel to parallel sides of a trapezium divides the non-parallel sides proportionally (i.e. in the same ratio)

Solution:-

Given:- PQRS is a trapezium in which $PQ \parallel SR \parallel XY$

To Prove:- $\frac{PX}{XS} = \frac{QY}{YR}$



Construction:- PR is joined which intersects XY at A.

Proof:- In $\triangle PSR$, $XA \parallel SR$

$$\therefore \frac{PX}{XS} = \frac{PA}{AR} \text{----- (1)} \quad \text{[Thales Theorem]}$$

$\triangle PRQ$, $AY \parallel PQ$

$$\therefore \frac{RY}{YQ} = \frac{AR}{PA}$$

$$\frac{QY}{YR} = \frac{PA}{AR} \text{----- (2)} \quad \text{(Taking reciprocals)}$$

From (i) and (ii) we get

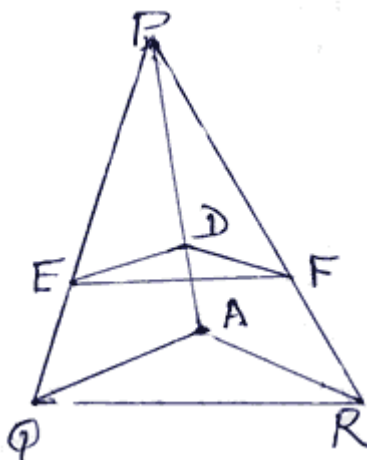
$$\frac{PX}{XS} = \frac{QY}{YR}$$

Example 5. In the given figure $DE \parallel AQ$ and $DF \parallel AR$

Prove that $EF \parallel QR$

Solution:-

In $\triangle APQ$, $DE \parallel AQ$



$$\therefore \frac{PE}{EQ} = \frac{PD}{DA} \text{-----(1)}$$

$\triangle APR, DF \parallel AR$

$$\therefore \frac{PD}{DA} = \frac{PF}{FR} \text{-----(2)}$$

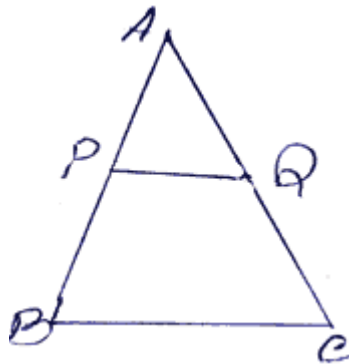
from (1) and (2) we get

$$\frac{PE}{EQ} = \frac{PF}{FR}$$

$$\therefore EF \parallel QR$$

Exercise - 12

1. In the given figure, $PQ \parallel BC$, $AP = 2.4\text{cm}$, $AQ = 2\text{cm}$, $QC = 3\text{cm}$ and $BC = 6\text{cm}$. Find AB and PQ .



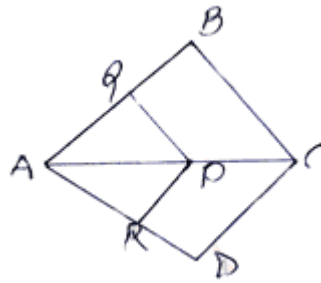
2. The diagonals AC and BD of a quadrilateral $ABCD$ intersect each other at O such that

$$\frac{AO}{OC} = \frac{BO}{OD}$$

prove that the quadrilateral $ABCD$ is trapezium.

3. In $\triangle ABC$, $DE \parallel BC$ and $\frac{AD}{DB} = \frac{3}{5}$. if $AC = 4.8\text{cm}$, find AE

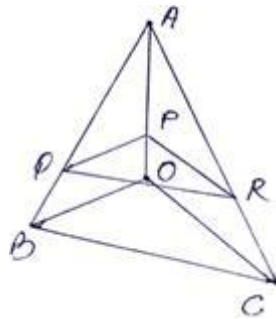
4. In the given figure, $PQ \parallel BC$ and $PR \parallel CD$,



prove that $\frac{AR}{AD} = \frac{AQ}{AB}$.

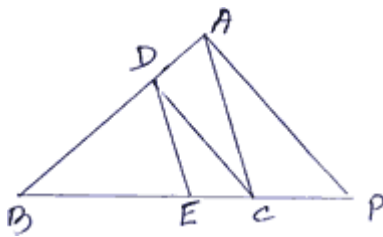
5. In $\triangle ABC$, DE is parallel to base BC , with D on AB and E on AC . If $\frac{AD}{DB} = \frac{2}{3}$, find $\frac{BC}{DE}$.

6. In the given figure, $PQ \parallel AB$ and $PR \parallel AC$. prove that $QR \parallel BC$.

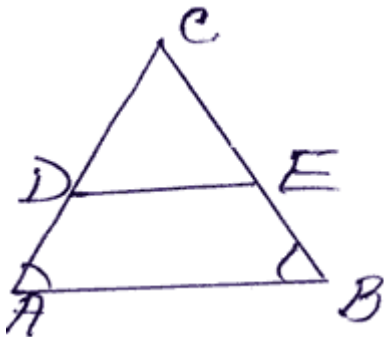


7. If three or more parallel lines, are intersected by two transversals, prove that the intercepts made by them on the transversals are proportional.

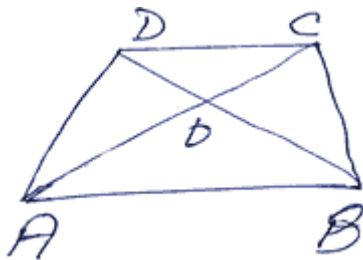
8. In the given figure, $DE \parallel AC$ and $DC \parallel AP$, prove that $\frac{BE}{EC} = \frac{BC}{CP}$.



9. In the given figure, $\angle A = \angle B$ and $DE \parallel AB$ prove that $AD = BE$.



10. In the given figure $AB \parallel CD$. If $OA = 3x - 19$, $OB = x - 4$, $OC = x - 3$ and $OD = 4$ cm, determine x .



Answers

(10). ($x = 11$ cm or 8 cm)

Criteria for similarities of two triangles.

1. If in two triangles, the corresponding angles are equal, then their corresponding sides are proportional (i.e. in the same ratio) and hence the triangles are similar.

This property is referred to as the AAA similarity criterion

In the above property if only two angles are equal, then the third angle will be automatically equal

Hence AAA criteria is same as AA criteria.

2. If the corresponding sides of two triangles are proportional (i.e. in the same ratio), their corresponding angles are equal and hence the triangles are similar.

This property is referred to as SSS similarity criteria.

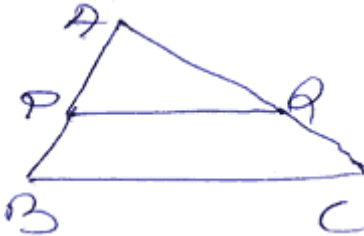
3. If one angle of a triangle is equal to one angle of the other and the sides including these angles are proportional, the triangles are similar.

This property is referred to as SAS criteria.

Example 6. P and Q are points on AB and AC respectively of $\triangle ABC$. If AP = 1cm, PB = 2cm, AQ = 3cm and QC = 6cm. Show that BC = 3PQ.

Solution:-

Given:- $\triangle ABC$ in which P and Q are points on AB and AC such that AP = 1cm, AQ = 3cm, PB = 2cm, QC = 6cm.



To Prove:- BC = 3PQ

Proof:-
$$\therefore \frac{AP}{PB} = \frac{1}{2}, \frac{AQ}{QC} = \frac{3}{6} = \frac{1}{2}$$

$$\therefore \frac{AP}{PB} = \frac{AQ}{QC}$$

Hence PQ \parallel BC

$$\therefore \angle P = \angle B \text{ and } \angle Q = \angle C$$

$$\therefore \triangle APQ \sim \triangle ABC \quad (\text{AA-Similarity})$$

$$\therefore \frac{AP}{AB} = \frac{PQ}{BC} = \frac{AQ}{AC}$$

But AB = AP + PB = 1 + 2 = 3cm

$$\therefore \frac{PQ}{BC} = \frac{AP}{AB} = \frac{1}{3}$$

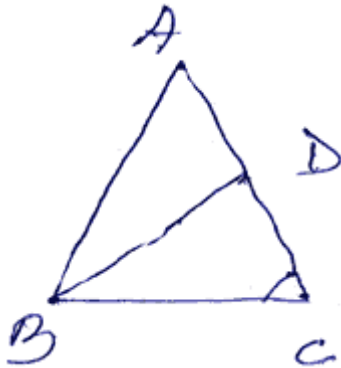
Hence BC = 3PQ.

Example 7. In a $\triangle ABC$, AB = AC and D is a point on side AC, such that $BC^2 = AC \times CD$

Prove that :- BD = BC

Solution:-

Given:- $\triangle ABC$ in which $AB = AC$ and D is a point on AC



Such that $BC^2 = AC \times CD$

To Prove :- $BD = BC$

Proof:- $BC^2 = AC \times CD$

Or, $BC \times BC = AC \times CD$

$$\text{Or, } \frac{BC}{CD} = \frac{AC}{BC} \text{-----(1)}$$

In $\triangle ABC$ and $\triangle BCD$, we have

$$\frac{BC}{CD} = \frac{AC}{BC} \quad [\text{by(1)}]$$

$\therefore \angle ACD = \angle DCB$ (common)

$\therefore \triangle ABC \sim \triangle BCD$ [SAS criteria]

$$\therefore \frac{BC}{CD} = \frac{AC}{BC} = \frac{AB}{BD}$$

$$\text{Or, } \frac{AC}{BC} = \frac{AB}{BD}$$

$$\text{Or, } \frac{AB}{BC} = \frac{AB}{BD} \quad [\because AB = AC]$$

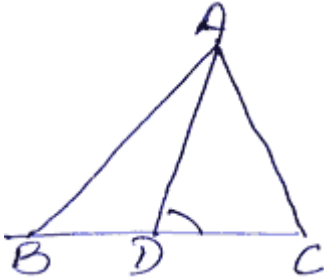
$$\text{Or, } \frac{1}{BC} = \frac{1}{BD}$$

$\therefore BD = BC$

Example 8. D is a point on the side BC of a $\triangle ABC$ such that $\angle ADC$ and $\angle BAC$ are equal.

Prove that $CA^2 = DC \times CB$

Solution:-



Given:- D is a point on the side BC of a $\triangle ABC$ such that $\angle ADC = \angle BAC$

To Prove:- $CA^2 = DC \times CB$

Proof:- In $\triangle ADC$ and $\triangle ACB$

$$\angle BAC = \angle ADC \quad (\text{given})$$

$$\angle ACB = \angle DCA \quad (\text{common})$$

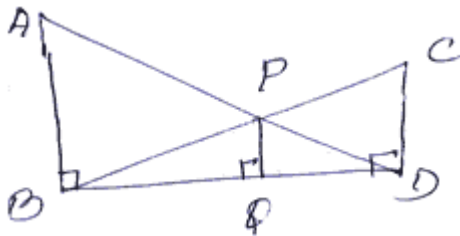
$$\therefore \triangle ACB \sim \triangle DCA \quad (\text{AA similarity})$$

$$\therefore \frac{BC}{AC} = \frac{AC}{DC}$$

$$\Rightarrow AC^2 = DC \times CB$$

Exercise - 13

1. In the adjoining figure, $\angle ABD = \angle CDB = \angle PQB = 90^\circ$. If



AB = x units CD = y units and PQ = Z units, Prove

that $\frac{1}{x} + \frac{1}{y} = \frac{1}{z}$,

2. In a $\triangle ABC$, P and Q are point on the side AB and AC respectively such that PQ is parallel to BC. Prove that median AD drawn from A to BC, bisect PQ.
3. Through the mid-point M of the side CD of a parallelogram AB CD, the line BM is drawn intersecting AC in L and AD produced in E. Prove that $EL = 2BL$.
4. ABC is a triangle right angled at C. If P is the length of perpendicular from C to AB and $AB = c$, $BC = a$ and $CA = b$, show that $pc = ab$
5. Two right angles ABC and DBC are drawn on the same hypoeuuge BC and on the same side of BC. If AC and BD interscta at P, prove that $AP \times PC = BP \times PD$
6. The perimeter of two smilar triangles ABC and PQR are respectively 32cm and 24cm.If $PQ = 12$ cm, find AB.
7. In a right triangles ABC, the perpendicular BD on the hypotenuse Ac is drown. Prove that $AC \times CD = BC^2$
8. In $\triangle ABC$, $\angle A$ is aculte, BD and CE are perenducular on AC and AB respectively. Prove that $AB \times AE = AC \times AD$
9. Through the vertex D of a parallotogram ABCD, a line is drawn to intersect the sides AB and CB produced at E and F respectively prove that: $\frac{DA}{AE} = \frac{FB}{BE} = \frac{FC}{CD}$
10. Two sides and a mediam bisecting one of these sides of a triangle are respectively proportional to the two sides and the corresponding mediam of the other triangle. Prove that the triangles are similar.
11. If the angles of one triangles are respectively equal to the angles of another tranles. Prove that the ratio of their corresponding sides is the same as the ratio of their corresponding.
1. medians
 2. altitudes
 3. angle bisectors
12. E is a point on side AD produced of a parallelogram ABCD and BE intersects CD at F. prove that $\triangle ABE \sim \triangle CFB$.
13. If a perpedicular is drawn from the vertex of the right angles of a right triangles to the hypoteuuse, the triangles on each side of the perpendicular are similar to the whole triangles and to each other.

Theorem 2. The ratio of the ares of two similar triangles is equal to the ratio of the squares of their corresponding sides.

Given:- $\triangle ABC \sim \triangle PQR$

To prove:

$$\frac{\text{ar}(\Delta ABC)}{\text{ar}(\Delta PQR)} = \frac{AB^2}{PQ^2} = \frac{BC^2}{QR^2} = \frac{CA^2}{RP^2}$$

Construction: $AD \perp BC$ and $PS \perp QR$ are drawn as in figure

proof:-

$$\frac{\text{ar}(\Delta ABC)}{\text{ar}(\Delta PQR)} = \frac{1/2 \times BC \times AD}{1/2 \times QR \times PS} \left[\text{area of } \Delta = \frac{1}{2} \times \text{base} \times \text{alt.} \right]$$

Or,

$$\frac{\text{ar}(\Delta ABC)}{\text{ar}(\Delta PQR)} = \frac{BC}{QR} \times \frac{AD}{PS} \text{----- (1)}$$

Now in $\Delta^s ADB$ and PSQ ,

$$\angle B = \angle Q \quad [As \Delta ABC \sim \Delta PQR]$$

$$\angle ADB = \angle PSQ \quad [Each 90^\circ]$$

$$\therefore \Delta ADB \sim \Delta PSQ \quad [AA \text{ similarly}]$$

$$\therefore \frac{AD}{PS} = \frac{AB}{PQ} \text{----- (2)}$$

But $\frac{AB}{PQ} = \frac{BC}{QR} \quad [sin \text{ ce } \Delta ABC \sim \Delta PQR]$

$$\therefore \frac{AD}{PS} = \frac{BC}{QR} \quad [from(2)] \text{----- (3)}$$

$$\therefore \frac{\text{ar}(\Delta ABC)}{\text{ar}(\Delta PQR)} = \frac{BC}{QR} \times \frac{BC}{QR} \quad [from(1) \& (3)]$$

$$= \frac{BC^2}{QR^2} \text{----- (4)}$$

Also $\frac{AB}{PQ} = \frac{BC}{QR} = \frac{CA}{RP} \text{----- (5)} [as, \Delta ABC \sim \Delta PQR]$

Hence,

$$\frac{ar(\triangle ABC)}{ar(\triangle PQR)} = \frac{AB^2}{PQ^2} = \frac{BC^2}{QR^2} = \frac{CA^2}{RP^2} \quad [from(4)and(5)]$$

Example 9. ABC and DEF are two similar triangles such that $AB = 2DE$ and area of $\triangle ABC$ is 56sq.cm, find the area of $\triangle DEF$.

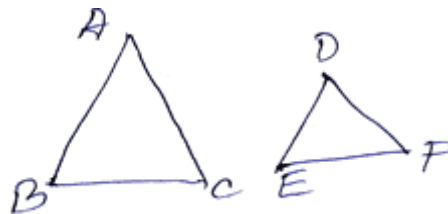
Solution:-

Given:- $ar(\triangle ABC) = 56sq.cm., AB = 2DE$

To find: Area of $\triangle DEF$.

Proof: $\triangle ABC \sim \triangle DEF$ (given)

and $AB = 2DE$ (given)



$$\therefore \frac{AB^2}{DE^2} = \frac{ar(\triangle ABC)}{ar(\triangle DEF)}$$

$$Or, \frac{(2DE)^2}{DE^2} = \frac{56}{ar(\triangle DEF)}$$

$$Or, \frac{4DE^2}{DE^2} = \frac{56}{ar(\triangle DEF)}$$

$$Or, 4 \times ar\triangle DEF = 56$$

$$Or, ar\triangle DEF = \frac{56}{4} = 14sq.cm$$

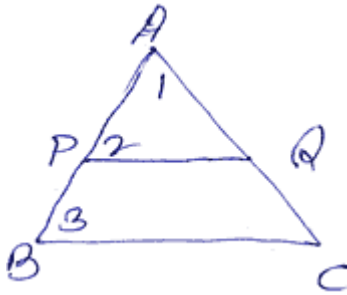
Example 10. ABC is a triangle, PQ is the line segment intersecting AB in P and AC in Q such that $PQ \parallel BC$ and divides $\triangle ABC$, into two parts equal in area. Find BP : AB

Solution:

Given: $\triangle ABC$, in which $PQ \parallel BC$, and PQ divides $\triangle ABC$, into two parts equal in area.

To find: BP : AB

Proof:- In $\Delta^s APQ$ and ABC



$$\angle 1 = \angle 1 \quad [\text{common}]$$

$$\angle 2 = \angle 3 \quad [PQ \parallel BC]$$

$$\therefore \Delta APQ \sim \Delta ABC \quad [AA \text{ corollary}]$$

$$\frac{\text{ar}(\Delta APQ)}{\text{ar}(\Delta ABC)} = \frac{AP^2}{AB^2}$$

$$\text{Or, } \frac{\text{ar}(\Delta APQ)}{2\text{ar}(APQ)} = \frac{AP^2}{AB^2}$$

$$\text{Or, } \frac{1}{2} = \frac{AP^2}{AB^2}$$

$$\therefore \frac{AP}{AB} = \frac{1}{\sqrt{2}}$$

$$\frac{AB - BP}{AB} = \frac{1}{\sqrt{2}}$$

$$\frac{AB}{AB} - \frac{BP}{AB} = \frac{1}{\sqrt{2}}$$

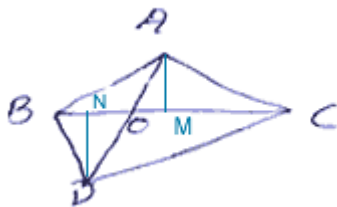
$$1 - \frac{1}{\sqrt{2}} = \frac{BP}{AB}$$

$$\frac{\sqrt{2}-1}{\sqrt{2}} \times \frac{\sqrt{2}}{\sqrt{2}} = \frac{BP}{AB}$$

$$\therefore \frac{BP}{AB} = \frac{2-\sqrt{2}}{2}$$

Example 11. In the given figure, ABC and DBC are two triangles on the same base BC . If AD intersects BC at O ,

Prove that $\frac{ar(\Delta ABC)}{ar(\Delta DBC)} = \frac{AO}{DO}$



Solution:

Given: ABC and DBC are two triangles on the same base BC. AD intersect BC at O.

To Prove: $\frac{ar(\Delta ABC)}{ar(\Delta DBC)} = \frac{AO}{DO}$

Construction:- $AM \perp BC, DN \perp BC$ are drawn.

Proof:- In $\Delta^s AMO$ and DNO

$$\angle AMO = \angle DNO \quad [each\ 90^\circ]$$

$$\angle AOM = \angle DON \quad [vertically\ opposite\ angles]$$

$$\therefore \Delta AMO \sim \Delta DNO \quad (AA\ similarity)$$

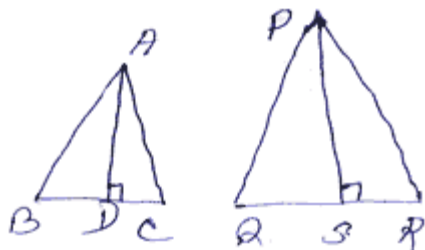
$$\therefore \frac{AO}{DO} = \frac{AM}{DN} \text{----- (1)}$$

$$\frac{ar(\Delta ABC)}{ar(\Delta DBC)} = \frac{\frac{1}{2} \times BC \times AM}{\frac{1}{2} \times BC \times DN} = \frac{AM}{DN}$$

$$= \frac{AO}{DO} \quad [form(1)]$$

Example 12. In the given fig ABC and PQR are isosceles triangles in which $\angle A = \angle P$.

If $\frac{ar(\Delta ABC)}{ar(\Delta PQR)} = \frac{9}{16}$, find $\frac{AD}{PS}$



Solution:-

Given:- In $\Delta^s ABC$ and PQR , $\angle A = \angle P$. $AB = AC$ and $PQ = PR$

$$\frac{\text{ar}(\Delta ABC)}{\text{ar}(\Delta PQR)} = \frac{9}{16}$$

$$\frac{AD}{PS} = ?$$

To find: PS

Proof:- ΔABC , is isosceles with $AB = AC$

$$\therefore \frac{AB}{AC} = 1 \dots \dots \dots (1)$$

ΔPQR is isosceles with $PQ = PR$

$$\therefore \frac{PQ}{PR} = 1 \dots \dots \dots (2)$$

From (1) and (2) we get

$$\frac{AB}{AC} = \frac{PQ}{PR}$$

$$\text{Or, } \frac{AB}{PQ} = \frac{AC}{PR}$$

$$\angle A = \angle P \quad (\text{given})$$

$$\therefore \Delta ABC \sim \Delta PQR \quad (\text{SAS})$$

In $\Delta^s ADC$ and PSR

$$\angle ACD = \angle PRS \quad (\because \Delta ABC \sim \Delta PQR)$$

$$\angle ADC = \angle PSR \quad (= 90^\circ)$$

$$\therefore \Delta ADC \sim \Delta PSR \quad (\text{AA similarity})$$

$$\frac{AD}{PS} = \frac{AC}{PR} \dots\dots\dots(3) \quad (\because \triangle ABC \sim \triangle PQR)$$

$$\text{But } \frac{BC}{QR} = \frac{AC}{PR} \dots\dots\dots(4)$$

from (3) and (4)

$$\therefore \frac{AD}{PS} = \frac{BC}{QR} \dots\dots\dots(5)$$

We know $\frac{\text{ar}(\triangle ABC)}{\text{ar}(\triangle PQR)} = \frac{BC^2}{QR^2}$

$$\therefore \frac{9}{16} = \frac{AD^2}{PS^2}$$

$$\text{Or, } \frac{AD}{PS} = \frac{3}{4}$$

Exercise - 14

1. Prove that the area of the equilateral triangles describe on the side of a square is half the are of the equilateral triangle describe on its diagonals.

2. In the given figure $\triangle ABC \sim \triangle PQR$. Also $\text{ar}(\triangle ABC) = 4\text{ar}(\triangle PQR)$. If BC = 12cm, find QR.



3. ABC is a triangle right angled at A, AD is perpendicular to BC. IF BC = 13cm and AC = 5cm, find teh ratio of the areas of $\triangle ABC$ and $\triangle ADC$.

4. The area of two similar triangles are 121cm^2 and 64cm^2 respectively. If the median of the first triangle is 12.1cm, find the correstponding median of the other.

5. In an equilateral triangle with side a, prove that the area of the triangles is $\frac{a^2 \sqrt{3}}{4}$.

6. D and E are points on the sides AB and Ac respectively of $\triangle ABC$ such that DE is parallel to BC and AD : DB = 4 : 5. CD and BE intersect each other at F. Find the ratio of the areas of $\triangle DEF$ and $\triangle BCF$.

Answers

(2) 6cm

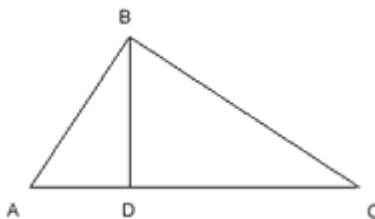
(3) 169 : 25

(4) 8.8cm

(6) 16 : 81

Pythagoras Theorem. (B audhayan Theorem)

Theorem 8.3: - In a right triangle, the square of the hypotenuse is equal to the sum of the squares of the other two sides.



Given: - $\angle B$ is a right angle of $\triangle ABC$

To Prove:- $AC^2 = AB^2 + BC^2$

Construction:- $BD \perp AC$ is drawn

Proof:- In $\triangle^s ADB$ and ABC

$$\angle ADB = \angle ABC \quad (= 90^\circ)$$

$$\angle BAD = \angle BAC \quad (\text{Common})$$

$$\therefore \triangle ADB \sim \triangle ABC \quad (\text{AA - Cor})$$

$$\therefore \frac{AD}{AB} = \frac{AB}{AC}$$

$$\text{Or, } AB^2 = AC \times AD \text{ -----(i)}$$

Similarly $\triangle ADC \sim \triangle ABC$

$$\therefore \frac{CD}{BC} = \frac{BC}{AC}$$

$$\text{Or, } BC^2 = AC \times CD \text{ -----(ii)}$$

Adding (i) and (ii) we get

$$AB^2 + BC^2 = AC \times AD + AC \times CD$$

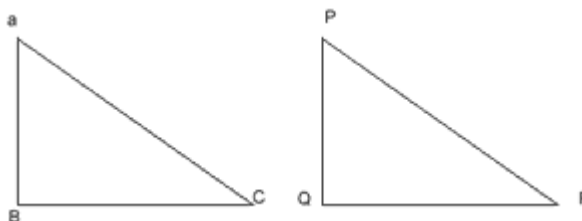
$$= AC \times (AD + CD)$$

$$= AC \times AC$$

$$= AC^2$$

$$\text{Or, } AC^2 = AB^2 + BC^2$$

Theorem 8.4 (Converse of Pythagoras Theorem): - In a triangle, if the square of one side is equal to the sum of the squares of the other two sides, then the angle opposite the first side is a right angle.



Given:- In $\triangle ABC$, $AB^2 + BC^2 = AC^2$

To prove:- $\angle ABC = 90^\circ$

Construction:- A triangle PQR is constructed such that $PQ = AB$, $QR = BC$ and $\angle PQR = 90^\circ$

Proof:- In $\triangle PQR$, $\angle Q = 90^\circ$

$$\therefore PR^2 = PQ^2 + QR^2 \quad [\text{Pythagoras Theorem}]$$

$$\text{Or, } PR^2 = AB^2 + BC^2 \text{-----(i) } [PQ = AB, QR = BC]$$

$$\text{But } AC^2 = AB^2 + BC^2 \text{-----(ii) (given)}$$

$$\therefore PR^2 = AC^2 \quad [\text{from (i) and (ii)}]$$

$$\text{Or, } PR = AC$$

$$\text{Or, } \triangle ABC \cong \triangle PQR \quad (\text{SSS Congruency})$$

$$\therefore \angle B = \angle Q = 90^\circ \quad (\text{CPCT})$$

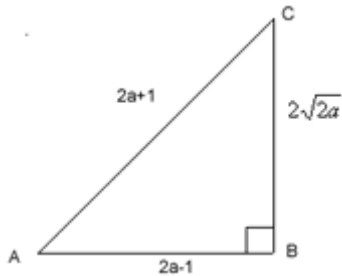
Hence $\angle ABC = 90^\circ$

Example 13. Determine whether the triangle having sides $(2a - 1)$ cm, $2\sqrt{2a}$ cm and $(2a + 1)$ cm is a right angled triangle.

Sol:- Let $AB = (2a - 1)$ cm,

$$BC = 2\sqrt{2a} \text{ cm}$$

$$AC = (2a + 1) \text{ cm}$$

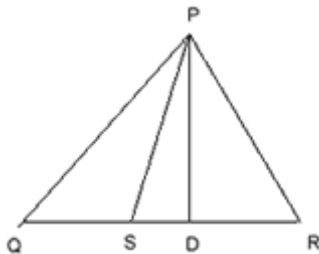


$$\begin{aligned} AB^2 + BC^2 &= (2a - 1)^2 + (2\sqrt{2a})^2 \\ &= 4a^2 - 4a + 1 + 8a \\ &= 4a^2 + 4a + 1 \\ &= (2a + 1)^2 \\ &= AC^2 \end{aligned}$$

$\therefore \triangle ABC$ is a right angled triangle.

Example 14. In an equilateral triangle PQR, the side QR is trisected at S. prove that $9 PS^2 = 7 PQ^2$

Solution:-



Given:- In an equilateral $\triangle PQR$, QR is trisected at S.

To Prove:- $9 PS^2 = 7 PQ^2$

Construction:- $PD \perp QR$ is drawn

Proof:- $QD = DR = QR/2$ -----(i)

[\perp Drawn on the base of an equilateral \triangle bisect it]

Side QR is trisected at S(given)

$$\left. \begin{aligned} \therefore QS &= \frac{1}{3}QR \\ SR &= \frac{2}{3}QR \end{aligned} \right\} \text{-----(ii)}$$

In $\triangle PSR$, $\angle R$ is acute

$$\therefore PS^2 = PR^2 + SR^2 - 2 \quad RSRD$$

$$PS^2 = PR^2 + \left(\frac{2}{3}QR\right)^2 - 2 \cdot \frac{2}{3}QR \times \frac{QR}{2}$$

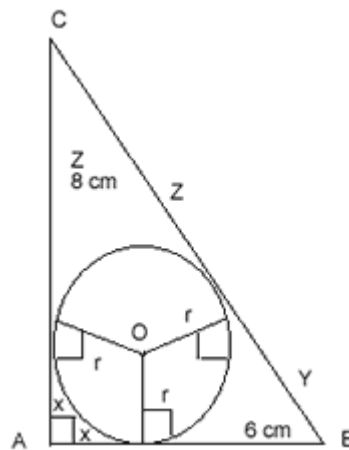
$$PS^2 = PR^2 + \frac{4}{9}QR^2 - \frac{2}{3}QR^2$$

$$PS^2 = PQ^2 + \frac{4}{9}PQ^2 - \frac{2}{3}PQ^2$$

$$PS^2 = \frac{9PQ^2 + 4PQ^2 - 6PQ^2}{9}$$

$$9PS^2 = 7PQ^2$$

Example 15. In the given figure, ABC is right angled triangle with the AB = 6cm and AC = 8cm. A circle with centre O has been inscribed inside the triangle. Calculate the value of r, the radius of the inscribed circle.



Solution:- In right $\triangle CAB$

$$BC^2 = AB^2 + AC^2 \text{ [By Pathagoras theorem]}$$

$$= 6^2 + 8^2$$

$$= 36 + 64$$

$$= 100$$

$$BC = \sqrt{100} = 10cm$$

$$S = \frac{6+8+10}{2} = 12cm$$

$$\begin{aligned} \text{Area of } \triangle ABC &= \frac{1}{2} \times \text{base} \times \text{altitude} \\ &= \frac{1}{2} \times 6 \times 8 = 24cm^2 \end{aligned}$$

$$\begin{aligned} \therefore \text{ radius, } r &= \frac{\text{Area of } \triangle ABC}{S} \\ &= 24/12 \\ &= 2cm \end{aligned}$$

Example 16. ABC is a right triangle, right angled at C. If p is the length of the perpendicular from C to AB and a, b, c have the usual meaning, then prove that

1. $pc = ab$

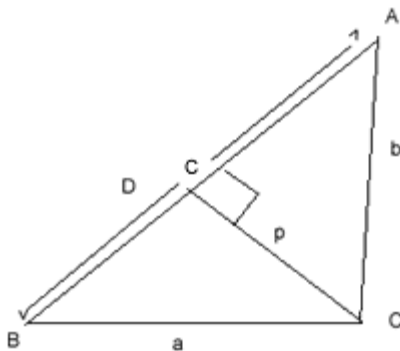
2. Or, $\frac{1}{p^2} = \frac{1}{a^2} + \frac{1}{b^2}$

Solution:- (i) Area of $\triangle ABC$, taking BC as base = $\frac{1}{2} \times BC \times AC$

$$= \frac{1}{2}ab \text{-----(i)}$$

Area of $\triangle ABC$, taking AB as base = $\frac{1}{2} \times AB \times CD$

$$= \frac{1}{2}cp \text{-----(ii)}$$



\therefore from (i) and (ii) $\frac{1}{2} ab = \frac{1}{2} cp$

$$\text{Or, } pc = ab$$

Or, $c = ab/p$ -----(iii)

(ii) In right $\triangle ABC$,

$$c^2 = a^2 + b^2$$

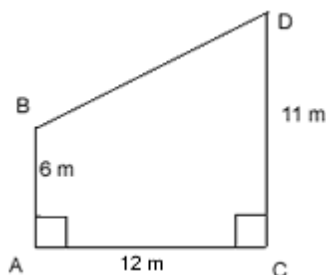
$$\left(\frac{ab}{p}\right)^2 = a^2 + b^2$$

$$\frac{1}{p^2} = \frac{a^2 + b^2}{a^2b^2} = \frac{a^2}{a^2b^2} + \frac{b^2}{a^2b^2}$$

Or,
$$\frac{1}{p^2} = \frac{1}{a^2} + \frac{1}{b^2}$$

Exercise - 15

1. The perpendicular AD on the base BC of a $\triangle ABC$ intersects BC at D so that $DB = 3CD$. Prove that $2AB^2 = 2AC^2 + BC^2$.
2. P and Q are points on the side CA and CB respectively of a $\triangle ABC$ right angled at C.
Prove that $AQ^2 + BP^2 = AB^2 + PQ^2$.
3. In $\triangle ABC$, if AD is the median, Show that $AB^2 + AC^2 = 2(AD^2 + BD^2)$
4. PQR is an isosceles right triangle, right angled at R. Prove that $PQ^2 = 2PR^2$.
5. In a $\triangle ABC$, $\angle B$ is an acute angle and $AD \perp BC$. Prove that $AC^2 = AB^2 + BC^2 - 2BC \cdot BD$.
6. In the adjoining figure, find the length of BD, If $AB \perp AC$ and $CD \perp AC$.



1.

7. Prove that the altitude of an equilateral triangle of side $2a$ is $a\sqrt{3}$.
8. P and Q are the midpoint of the sides CA and CB respectively of $\triangle ABC$ right angled at C. Prove that $4(AQ^2 + BP^2) = 5AB^2$

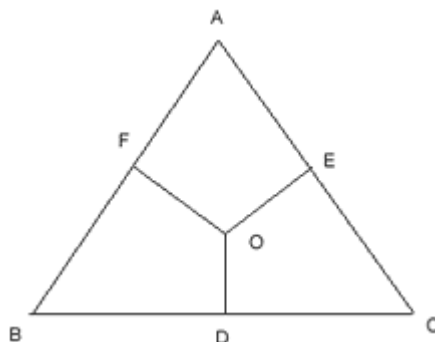
9. In a triangle ABC, AD is perpendicular on BC. Prove that $AB^2 + CD^2 = AC^2 + BD^2$

10. Prove that the sum of the squares of the sides of a rhombus is equal to the sum of the squares of its diagonals.

11. In adjoining figure, OD, OE and OF are respectively perpendiculars to the sides BC, CA and AB from any point O in the interior of the triangle Prove that

(i) $OA^2 + OB^2 + OC^2 - OD^2 - OE^2 - OF^2 = AF^2 + BD^2 + CE^2$

(ii) $AF^2 + BD^2 + CE^2 = AE^2 + CD^2 + BF^2$



12. O is any point in the interior of a rectangle ABCD. Prove that $OB^2 + OD^2 = OC^2 + OA^2$

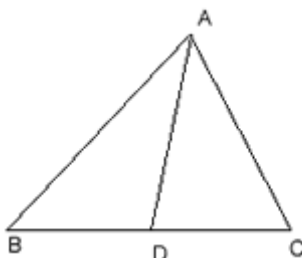
Answers

(6) 13m

Internal Bisector of an angle of a Triangle

1. The internal bisector of an angle of a triangle divides the opposite side in the ratio of the sides containing the angle.
2. If a line-segment drawn from the vertex of a triangle to its opposite side and divides it in the ratio of the sides containing the angle, then the line segment bisect the angle of the vertex.

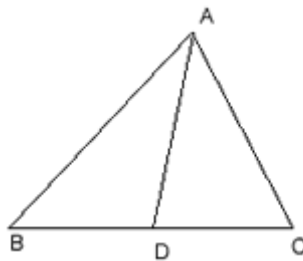
Example 17. In the adjoining fig AD is the bisector of $\angle A$. If $BD = 4\text{cm}$, $DC = 3\text{cm}$ and $AB = 6\text{cm}$, determine AC.



Solution:- In $\triangle ABC$, AD is the bisector of $\angle A$.

$$\begin{aligned} \therefore \frac{AB}{AC} &= \frac{BD}{DC} \\ \therefore \frac{6}{AC} &= \frac{4}{3} \\ \therefore AC &= \frac{6 \times 3}{4} \\ &= 4.5cm \end{aligned}$$

Example 18. In the adjoining fig, AD is bisector of $\angle A$. If AB = 5.6cm, AC = 4cm, DC = 3cm, find BC.



Solution:- In $\triangle ABC$, AD is the bisector of $\angle A$.

$$\begin{aligned} \therefore \frac{AB}{AC} &= \frac{BD}{DC} \\ \frac{5.6}{4} &= \frac{BD}{3} \\ \therefore BD &= \frac{5.6 \times 3}{4} = 4.2cm \\ BC &= BD + DC \\ &= 4.2 + 3cm \\ &= 7.2 \end{aligned}$$

Exercise - 16

1. In $\triangle ABC$, the bisector of $\angle B$ intersects the side AC at D. A line parallel to side AC intersects line segment AB, DB and CB at points P, R and Q respectively. Prove that

1. $AB \times CQ = BC \times AP$
2. $PR \times BQ = QR \times BP$

2. ABCD is a quadrilateral in which AB = AD. The bisector of $\angle BAC$ and $\angle CAD$ intersects the side BC and CD respectively at E and F. Prove that the segment EF is parallel to the diagonal BD.

3. In $\triangle ABC$, $\angle B = 2\angle C$ and the bisector of $\angle B$ intersects AC at D. Prove that

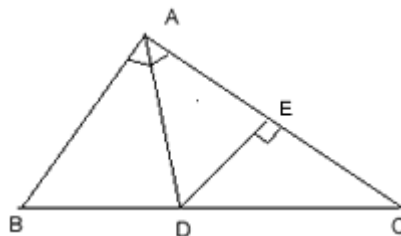
$$\frac{BD}{DA} = \frac{BC}{BA}$$

4. If the diagonal BD of a quadrilateral ABCD bisects both $\angle B$ and $\angle D$, show that $\frac{AB}{BC} = \frac{AD}{CD}$

5. D is the midpoint of side BC of $\triangle ABC$. DE and DF are respectively bisectors of $\angle BDA$ and $\angle CDA$ such that E and F lie on AB and AC, respectively. Prove that EF \parallel BC.

6. O is a point inside a $\triangle ABC$. The bisector of $\angle AOB$, $\angle BOC$ and $\angle COA$ meet the sides AB, BC and CA in points D, E and F respectively. Prove that AD · BE · CF = DB · EC · FA

7. In the adjoining figure, $\angle BAC = 90^\circ$, AD is bisector of $\angle BAC$. $DE \perp AC$, Prove that $DE \times (AB + AC) = AB \times AC$.



8. If the bisector of an angle of a triangle bisect the opposite side, prove that the triangle is isosceles.

9. BO and CO are respectively the bisectors of $\angle B$ and $\angle C$ of $\triangle ABC$. AO is produced to meet BC at P. Show that

1. $\frac{AB}{BP} = \frac{AO}{OP}$

2. $\frac{AC}{CP} = \frac{AO}{OP}$

3. $\frac{AB}{AC} = \frac{BP}{CP}$

4. AP is the bisector of $\angle BAC$