

## SUMMATIVE ASSESSMENT - II (2015-16)

### SOCIAL SCIENCE

#### Class - IX

Time allowed : 3 hours

Maximum Marks : 90

#### General Instructions :

- (i) The question paper has two sections (Section A and Section B) with 30 questions in all. All questions are compulsory.
- (ii) Marks are indicated against each question.
- (iii) Questions from serial number 1 to 8 are very short answer type questions. Each question carries one mark.
- (iv) Questions from serial number 9 to 20 are 3 marks questions. Answer of these questions should not exceed 80 words each.
- (v) Questions from serial number 21 to 26 are 5 marks questions. Answer of these questions should not exceed 120 words each.
- (vi) Question number 27 and 28 are map question of 3 marks each, from History and Geography respectively. After completion, attach the maps inside your answer book.
- (vii) Question number 29 and 30 are from Open Text themes and each question is of 5 marks.

#### SECTION - A

- How did restrictions to enter the markets in white areas impact the pastoralists? 1
- OR
- Mention the categories into which the forests were divided as per the Forest Act 1878. 1
- OR
- Why were Indian foods and fibre crops exported to Europe in the end of the 19th century? 1
- What is the windward side of the mountain. 1
- According to which fundamental right, the public places should be accessible to all the persons? 1
- Which house of Parliament is known as the "Upper Chamber" of the Parliament? 1
- How many states have more than 40 Lok Sabha constituencies in India? 1
- Which organisation conducts sample survey to estimate poverty line? 1
- Which neighbouring country of India has the lowest percentage of population earning below one dollar a day? 1
- Why is the basis of poverty line different in different countries? 1

- 9.1 Name the two countries of Africa where the Maasai cattle herders live. Mention two ways in which colonial regulations affected their life. 3  
OR
- 9.2 How were the principles of scientific forestry implemented in India? 3  
OR
- 9.3 How did the American landscape change by the early 20th century? 3
- 10.1 Mention the main features of world's first cricket club and the MCC. 3  
OR
- 10.2 Describe the shoe respect rules imposed by the colonial government. 3
- 11.1 What important changes were introduced in cricket in the 19th century? 3  
OR
- 11.2 Why did changes occur in male and female clothing in India during the colonial period? 3
- 12 Why have certain animal species gone extinct or are at the verge of extinction in our country? Give reasons. 3
- 13 Describe the distribution of population in India. 3
- 14 Which forest is the most widespread forest of India? What is its other name? Give example of any two species of trees of these forests. 3
- 15 "Women are subjected to many public restrictions in Saudi Arabia". What values are ignored in this conduct by state? 3
- 16 Mention any three discretionary powers of Indian President. 3
- 17 Describe the procedure of voting on the polling day. 3
- 18 "In poor families all suffer, but some suffer more than others." Explain the statement. 3
- 19 Give a brief account of poverty trends in India since 1973. 3
- 20 How is socio-cultural and economic factor responsible for poverty in India? 3
- 21.1 Name two game reserves developed by the colonial government on grazing land in Kenya and Tanzania. How did this affect the Maasai herders? 5  
OR
- 21.2 What is swidden agriculture? Where is it practised? Describe its main features. 5  
OR
- 22.1 How did it happen that the American dream of a land of plenty had turned into a nightmare? What lesson did it teach the settlers? 5
- 22.1 Who started playing cricket in India and how? Explain. 5



OR

Describe the women's dress reform movement in America. 5

"Cities are growing faster than the capacity of the economy to support them." Explain its effects. 5

Describe the importance of bio-sphere reserves with respect to the wildlife conservation policy of India. 5

"The scope of rights has expanded in recent times." Explain the statement with five examples. 5

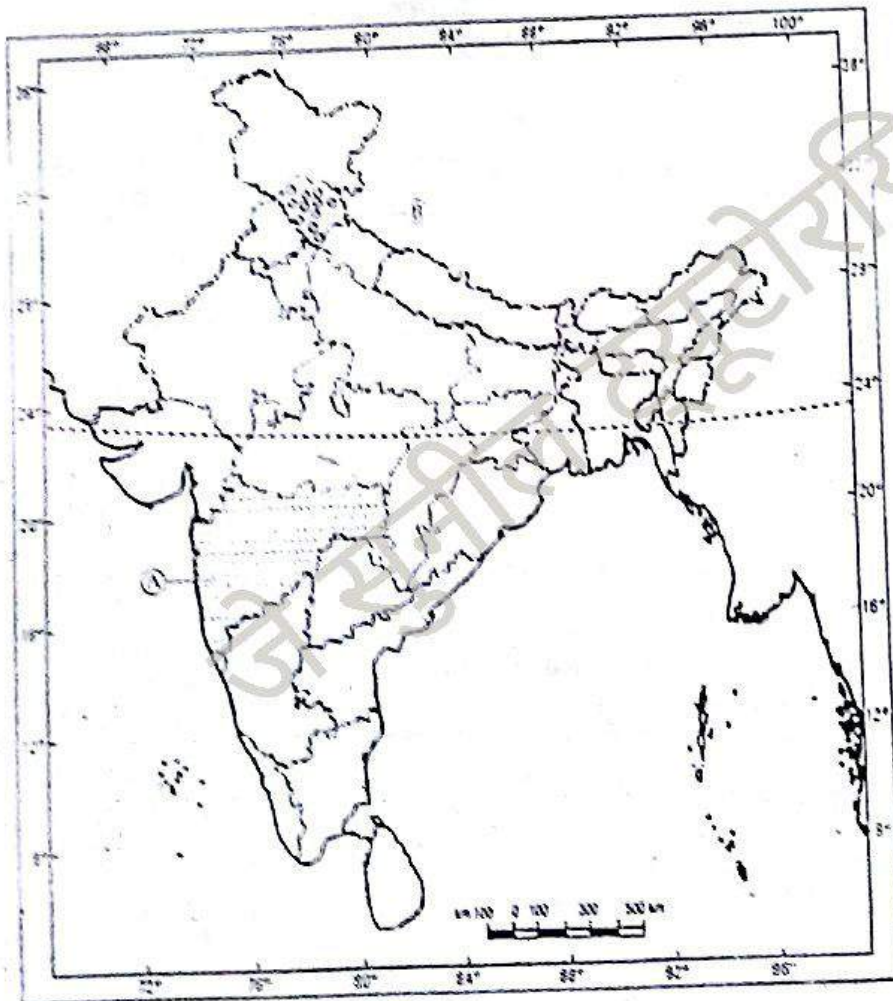
In your opinions which five norms should parties follow for campaigning? 5

The student has to attempt any one map question from question numbers 27a, 27b and 27c.

Question no. 28 is compulsory. The maps are attached with the question paper.

- (a) Two items A and B are shown in the given political outline map of India. Identify these items with the help of following information and write their correct names on the lines marked on the map. 3
- (A) A state Dhangar pastoral community related to the.
  - (B) The state to which Gaddis belonged.
- (b) On the same political outline map of India, locate and label the following item with appropriate symbol :
- (C) State related to Raikas.

Political Map of India



OR

27b Two items A and B are shown in the given political outline map of India. Identify these items with the help of following information and write their correct names on the lines marked on the map. 3

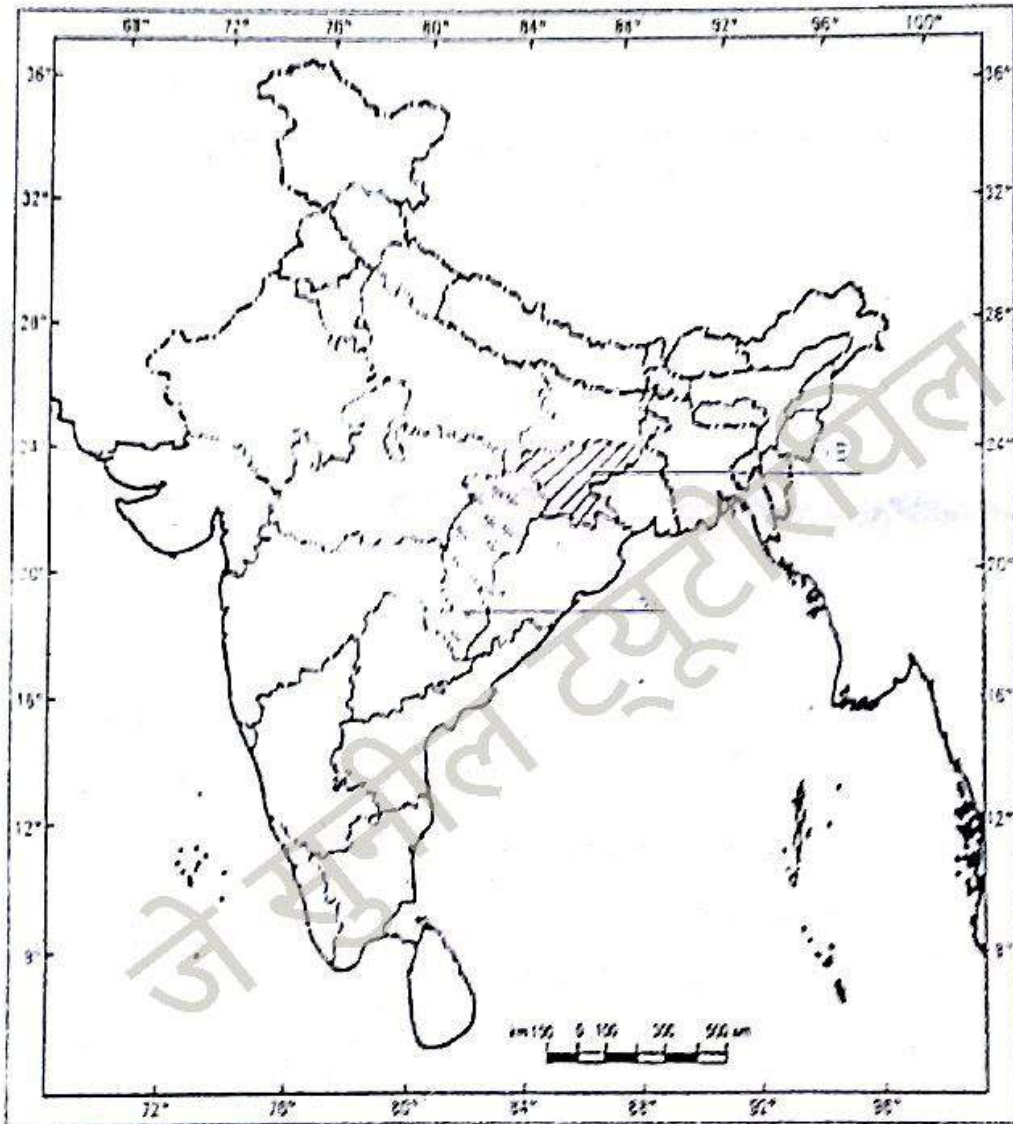
(A) State : Where Gonds tribes live.

(B) The region related to Birsa Munda.

On the same political outline map of India, locate and label the following item with appropriate symbol.

(C) Dehradun - Where First Imperial Forest Institute was established.

Political Map of India



OR

27c Two items A and B are shown in the given political outline map of India. of India. Identify these items with the help of following information and write their correct names on the lines marked on the map. 3

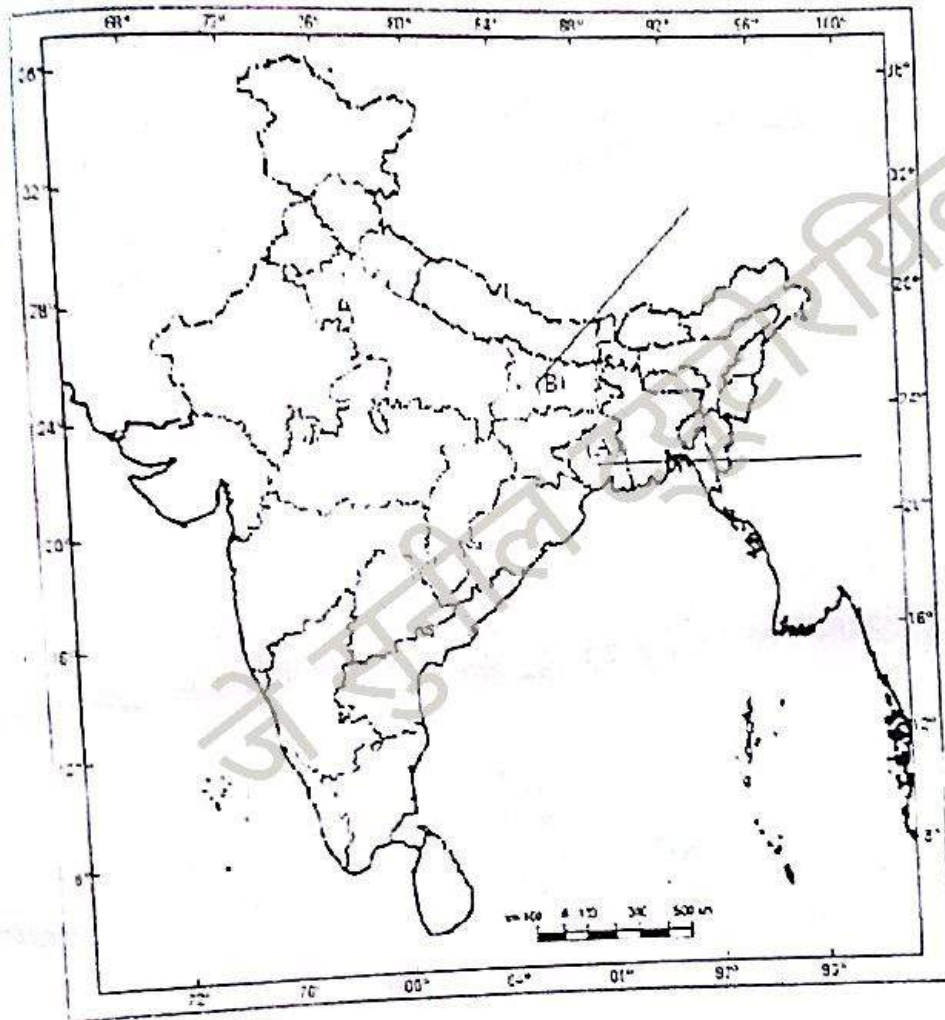
(A) The state where the 'Battle of Plassey' was fought.

(B) The state where peasants were forced to grow opium by the British company.



On the same political outline map of India, locate and label the following item with appropriate symbol  
 (C) Area around Banaras where peasants began to give up cultivation of opium due to unreasonable policy of advances.

Political map of India



- 28 (a) Two features (A) and (B) are shown in the political outline map of India. Identify these features with the help of the following information and write their correct names on the lines marked on the map. 3  
 (A) Type of natural vegetation.  
 (B) A wildlife sanctuary.
- (b) On the same political outline map of India locate and label the following feature with appropriate symbol.
- (c) The most sparsely populated state.