

KENDRIYA VIDYALAYA SANGATHAN VARANASI REGION  
HALF YEARLY EXAMINATION (2018 -19)

TIME: 2:30 hours CLASS – VII

SUB : MATHEMATICS

Max Marks: 80

General Instructions:

1. All questions are compulsory.
2. Question paper consists four sections.
3. Marks are given against each sections.

**SECTION – A**

1 x 6 = 6

1.  $-53 + \dots = -53$
2. Multiply :  $7 \times \frac{3}{5}$
3. Write equations for the statement: The sum of numbers  $x$  and 4 is 9.
4. Can two right angles be complement to each other?
5. How many medians can a triangle have?
6. Find the ratio of: 150 paise to 50 paise .

**SECTION – B**

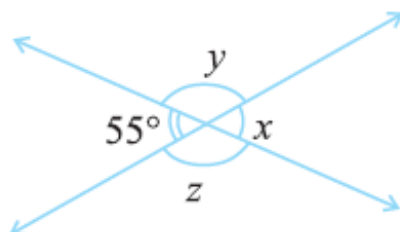
2 x 6 = 12

7. Solve:  $4 + \frac{7}{8}$
8. Solve:  $3n - 2 = 46$
9. Identify which of the following pairs of angles are complementary and which are supplementary.  
(i)  $65^\circ, 115^\circ$  (ii)  $63^\circ, 27^\circ$
10. Write **Side-Side Side** criteria for Congruence of two triangles .
11. Find: (a) 15% of 250
12. Cost of an item is Rs 50. It was sold with a profit of 12%. Find the Profit in rupees .

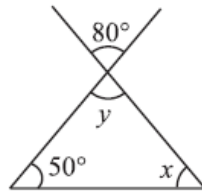
**SECTION – C**

3 x 10 = 30

13. Evaluate each of the following:  
(a)  $(-30) \div 10$  (b)  $(-3) \times (-6) \times (-2) \times (-1)$
14. Find the area of rectangle whose length is 5.7cm and breadth is 3 cm.
15. The marks (out of 100) obtained by a group of students in a science test are  
85, 76, 90, 85, 39, 48, 56, 95, 81 and 75. Find the:  
(i) Highest and the lowest marks obtained by the students.  
(ii) Mean marks obtained by the group.
16. Set up equation and solve to find the unknown numbers in the following case:  
(a) Add 4 to eight times a number; you get 60.
17. Find the values of the angles  $x$ ,  $y$ , and  $z$  in each of the following:

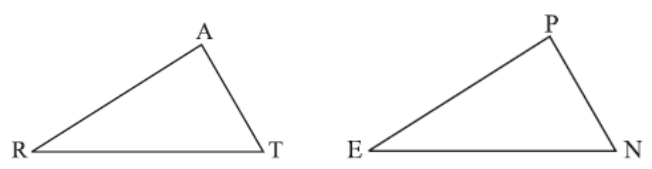


18. Find the values of the unknowns  $x$  and  $y$  in the following diagrams:



19. Is it possible to have a triangle with the following sides?  
3 cm, 6 cm, 7 cm

20. To show that  $\triangle ART \cong \triangle PEN$ ,  
If you have to use SSS criterion, then you need to show  
(i)  $AR = \dots\dots\dots$  (ii)  $RT = \dots\dots\dots$  (iii)  $AT = \dots\dots\dots$



21. The population of a city decreased from 25,000 to 24,500. Find the percentage decrease.  
22. Find the whole quantity if (a) 5% of it is 600.

**SECTION – D** **4 x 8 = 32**

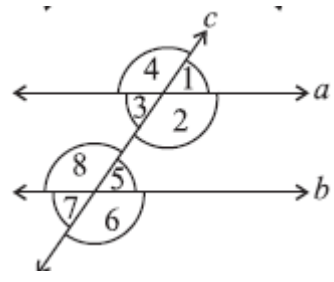
23. Verify  $(-30) \times [13 + (-3)] = [(-30) \times 13] + [(-30) \times (-3)]$   
24. The length of a rectangle is 7.1 cm and its breadth is 2.5 cm. What is the area and perimeter of the rectangle?  
25. The runs scored in a cricket match by 11 players is as follows:  
6, 15, 120, 50, 100, 80, 10, 15, 8, 10, 15 .  
Find the **mode and median** of this data. Are the two same?

26. Following data gives total marks (out of 600) obtained by six children of a particular class.  
Represent the data on a bar graph.

Students	Ajay	Bali	Dipti	Faiyaz	Geetika	Hari
Marks Obtained	450	500	300	360	400	540

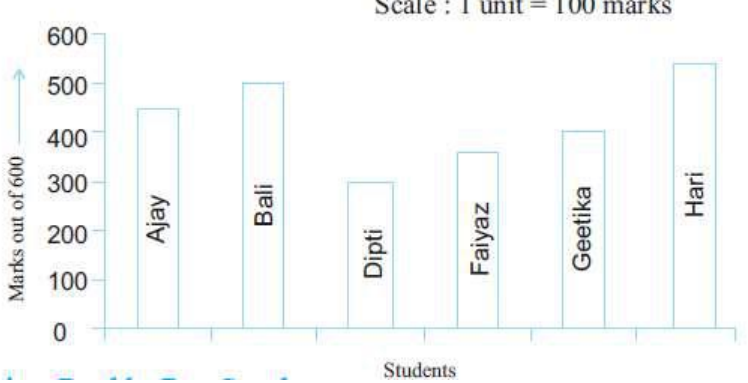
27. The teacher tells the class that the highest marks obtained by a student in her class is twice the lowest marks plus 7. The highest score is 87. What is the lowest score?

28. In the adjoining figure, identify  
(i) Two pairs of corresponding angles (ii) The pairs of alternate interior angles.



29. PQR is a triangle right angled at P. If  $PQ = 10$  cm and  $PR = 24$  cm, find QR.  
30. Find the amount to be paid at the end of 3 years in following case: Principal = Rs 1,200 at 12% p.a.

S.No	Answer	Marks
<b>GROUP - A</b>		
1	0 ( Zero )	1
2	$\frac{21}{5}$	1
3	$X + 4 = 9$	1
4	No	1
5	Three Medians	1
6	$\frac{150}{50} = 3:1$	1
<b>GROUP - B</b>		
7	$4 + \frac{7}{8} = \frac{4 \times 8 + 7}{8} = \frac{32+7}{8} = \frac{39}{8}$	2
8	$3n - 2 = 46, 3n = 46 + 2, 3n = 48, n = \frac{48}{3} = 16$	2
9	(a) Supplementary (b) Complementary	2
10	<b>Side-Side Side criteria</b> – “If the three sides of one triangle are equal to the three corresponding sides of another triangle, then the triangles are congruent.”	2
11	$15\% \text{ of } 250 = \frac{15}{100} \times 250 = \frac{375}{10} = 37.5$	2
12	Profit = 12% of 50 = $\frac{12}{100} \times 50 = \frac{600}{100} = 6$	2
<b>GROUP- C</b>		
13	(a) $(-30) \div 10 = (-3)$ (b) $(-3) \times (-6) \times (-2) \times (-1) = 36$	3
14	Area of Rectangle = Length X Breadth $= 5.7 \times 3 = 17.1 \text{ Cm}^2$	3
15	Highest Marks= 95 , Lowest marks = 39 Mean = $\frac{85+76+90+85+39+48+56+95+81+75}{10} = \frac{730}{10} = 73$	3
16	Let, The Number = x According to the question, $8x + 4 = 60, 8x = 60 - 4, 8x = 56, x = \frac{56}{8} = 7$	3
17	$X = 55^\circ, 55^\circ + y = 180^\circ, y = 180^\circ - 55^\circ = 125^\circ$ $Y = z = 125^\circ$	3
18	$Y = 80^\circ, 50^\circ + 80^\circ + x = 180, 130^\circ + x = 180^\circ$ $X = 180^\circ - 130^\circ = 50^\circ$	3
19	$3+6 > 7$ Yes , $3+7 > 6$ Yes , $7+6 > 3$ Yes	3
20	(i) AR = <b>PE</b> (ii) RT = <b>EN</b> (iii) AT = <b>PN</b>	3
21	Decrease in Population = $25000 - 24500 = 500$ Percentage decrease = $\frac{\text{Decrease} \times 100}{\text{Present Population}} = \frac{500 \times 100}{25000} = 2\%$	3
22.	$5\% \text{ of } Y = 600, \frac{5}{100} \times Y = 600, 5Y = 600 \times 100$ $Y = \frac{600 \times 100}{5} = 12000 .$	3
<b>GROUP- D</b>		
23	$(-30) \times [13 + (-3)] = (-30) \times 10 = -300$ $[(-30) \times 13] + [(-30) \times (-3)] = -390 + 90 = -300$ So, $(-30) \times [13 + (-3)] = [(-30) \times 13] + [(-30) \times (-3)]$	4
24	Length = 7.1cm , Breadth = 2.5 cm Area of rectangle = $l \times b = 7.1 \times 2.5 = 177.5 \text{ cm}^2$ Perimeter of Rectangle = $2(l + b) = 2(7.1 + 2.5)$ $= 2 \times 9.6 = 19.2 \text{ cm}$	4

25.	<p>Ascending Order = 6,8,10,10,15,15,15,50,80,100,120</p> <p>Mode = 15</p> <p>Median = <math>\frac{n+1}{2}</math> th term = <math>\frac{11+1}{2}</math> th term</p> <p><math>\frac{12}{2}</math> th term = 6<sup>th</sup> Term = 15</p> <p><b>Median = 15</b></p>	4														
26.	<p style="text-align: center;">Scale : 1 unit = 100 marks</p>  <table border="1" style="margin-top: 10px;"> <caption>Student Marks</caption> <thead> <tr> <th>Student</th> <th>Marks</th> </tr> </thead> <tbody> <tr> <td>Ajay</td> <td>450</td> </tr> <tr> <td>Bali</td> <td>500</td> </tr> <tr> <td>Dipti</td> <td>300</td> </tr> <tr> <td>Faiyaz</td> <td>370</td> </tr> <tr> <td>Geetika</td> <td>410</td> </tr> <tr> <td>Hari</td> <td>540</td> </tr> </tbody> </table>	Student	Marks	Ajay	450	Bali	500	Dipti	300	Faiyaz	370	Geetika	410	Hari	540	4
Student	Marks															
Ajay	450															
Bali	500															
Dipti	300															
Faiyaz	370															
Geetika	410															
Hari	540															
27.	<p>Let,</p> <p>Lowest Score = X</p> <p>Highest Score = 2X + 7</p> <p>According to the Question,</p> <p><math>2X + 7 = 87</math> . <math>2X = 87 - 7</math> , <math>2X = 80</math> , <math>X = 40</math></p> <p><b>Lowest Score = 40</b></p>	4														
28.	<p>(a) Two pairs of corresponding angles are <math>\angle 1</math> &amp; <math>\angle 5</math> and <math>\angle 4</math> &amp; <math>\angle 8</math></p> <p>(b) The pairs of alternate interior angles. <math>\angle 2</math> &amp; <math>\angle 5</math> and <math>\angle 3</math> &amp; <math>\angle 8</math></p>	4														
29.	<p><math>QR^2 = PR^2 + PQ^2</math></p> <p><math>QR^2 = (24)^2 + (10)^2 = 576 + 100 = 676</math></p> <p><math>QR^2 = (26)^2</math> , <math>QR = 26</math> cm.</p>	4														
30.	<p>P = Rs.1200 , r = 12 % , t = 3 Years .</p> <p>S.I.= ? , Amount = ?</p> <p><math>S.I. = \frac{P \cdot r \cdot t}{100} = \frac{1200 \times 12 \times 3}{100} = \text{Rs. } 432.</math></p> <p>Amount = P + SI = 1200 + 432 = Rs.1632.</p>	4														